



例題 いくつでしょう。





数を書きましょう。



問題 いくつでしょう。

①



②



③



④



⑤



⑥



⑦



⑧



⑨



⑩



⑪




⑫




問題

いくつでしょう。


13




14




15




16




17




18




19




20




21




22




23




24




25




26




27




28



29




30




問題

いくつでしょう。


31




32




33




34




35




36




37




38




39




40




41





42



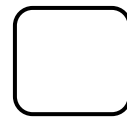
43




44



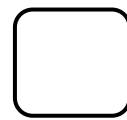
45



46



47



48

