

 は玉ネギを3個、 は玉ネギを4個、持っているよ。




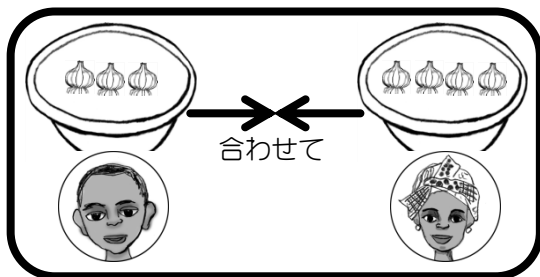
二人が持っている玉ネギを合わせると、何個になるかな？



合わせて




Bien!



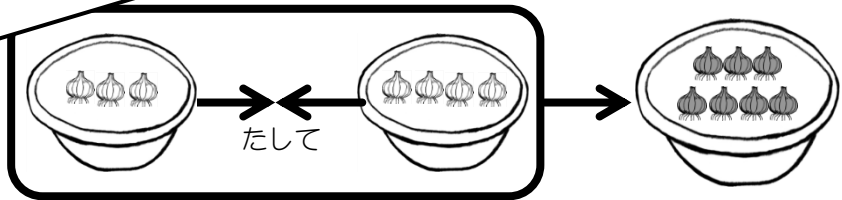
7個だ！



この図を、「たし算」の式で表すよ。



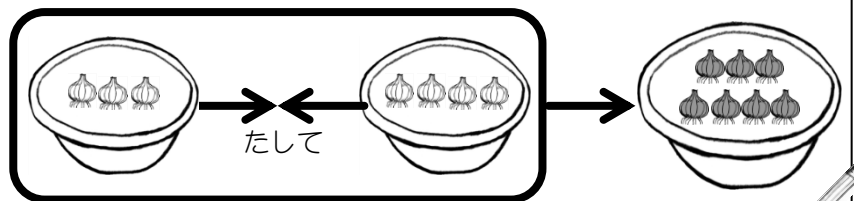
たし算は「+」と「=」を使うよ。□に玉ネギの数を書こう。



$$\square + \square = \square$$



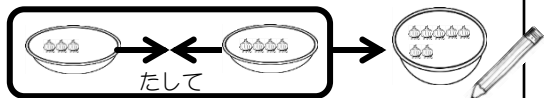
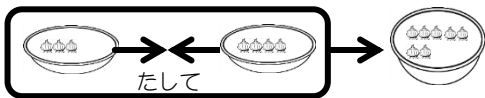
Bien!



$$3 + 4 = 7$$



例題 □ にあてはまる数を書きましょう。

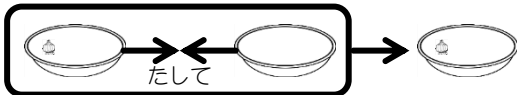


$$\square + \square = \square \Rightarrow 3 + 4 = 7$$

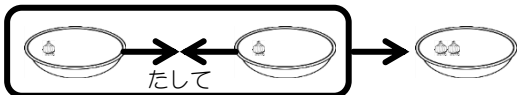


問題 □ にあてはまる数を書きましょう。

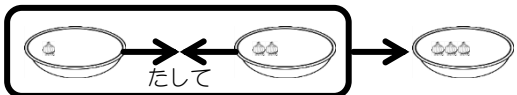
①



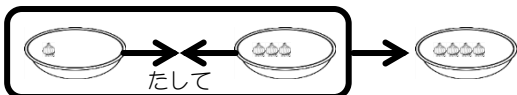
$$\square + \square = \square$$



$$\square + \square = \square$$

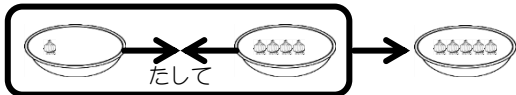


$$\square + \square = \square$$

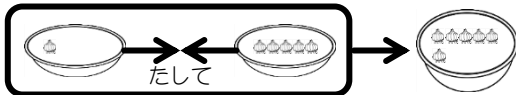


$$\square + \square = \square$$

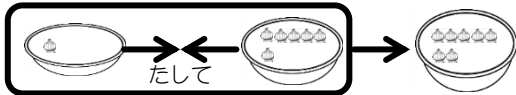
②



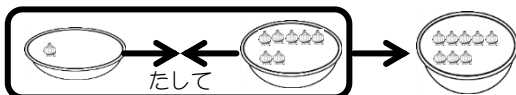
$$\square + \square = \square$$



$$\square + \square = \square$$



$$\square + \square = \square$$




$$\square + \square = \square$$

問題 □ にあてはまる数を書きましょう。

③

□ + □ = □



④

□ + □ = □

□ + □ = □

□ + □ = □

□ + □ = □

⑤

□ + □ = □

□ + □ = □

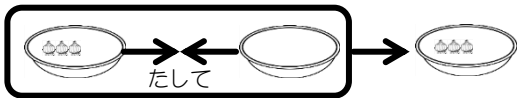
□ + □ = □

□ + □ = □

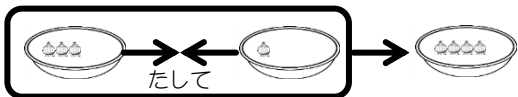
問題

□ にあてはまる数を書きましょう。

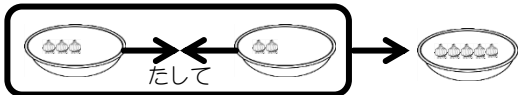
⑥



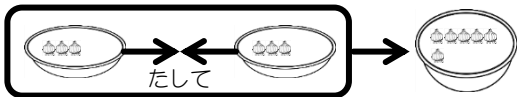
$$\square + \square = \square$$



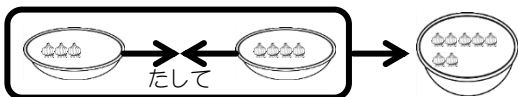
$$\square + \square = \square$$



$$\square + \square = \square$$

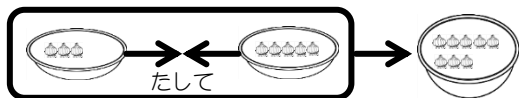


$$\square + \square = \square$$

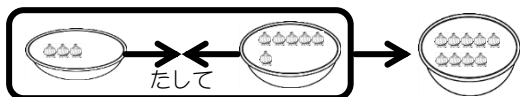


$$\square + \square = \square$$

⑦

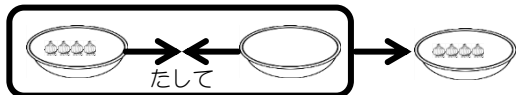


$$\square + \square = \square$$

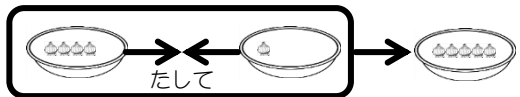


$$\square + \square = \square$$

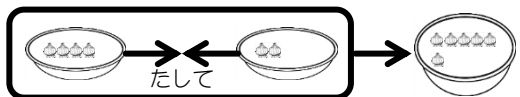
⑧



$$\square + \square = \square$$



$$\square + \square = \square$$



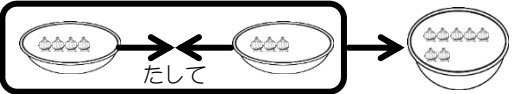
$$\square + \square = \square$$

問題

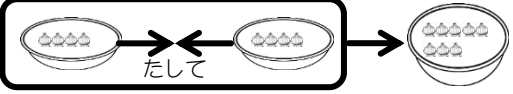


にあてはまる数を書きましょう。

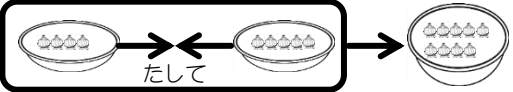
⑨



 + =

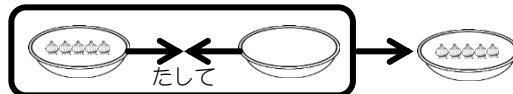


 + =

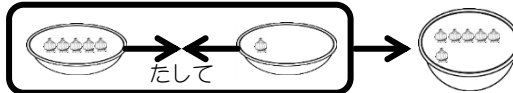


 + =

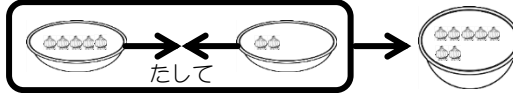
⑩



 + =

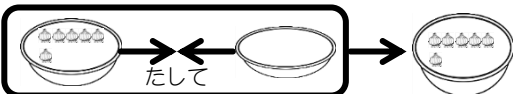


 + =

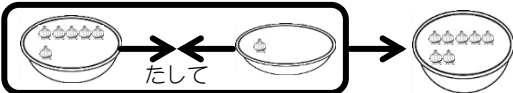


 + =

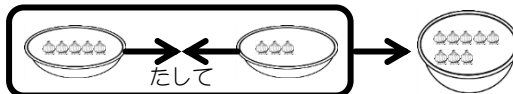
⑪



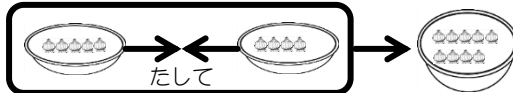
 + =



 + =



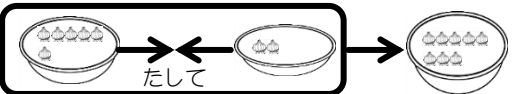
 + =



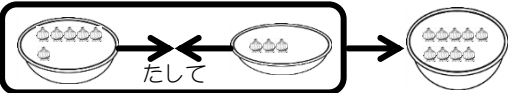
 + =

問題 にあてはまる数を書きましょう。

⑫

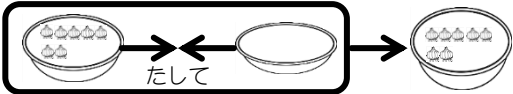


 + =

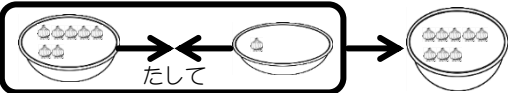


 + =

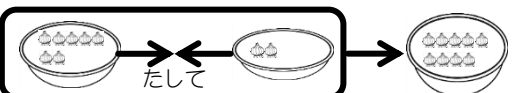
⑬



 + =

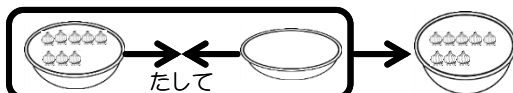


 + =

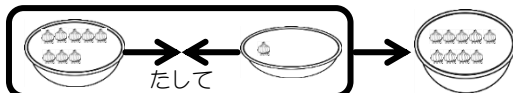


 + =

⑭

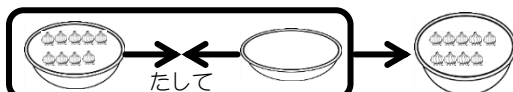


 + =



 + =

⑮



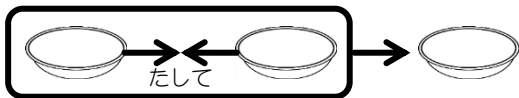
 + =



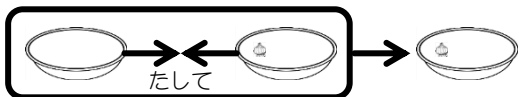
問題

□ にあてはまる数を書きましょう。

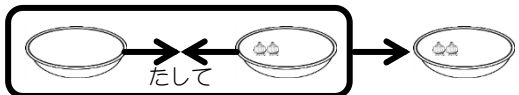
⑬



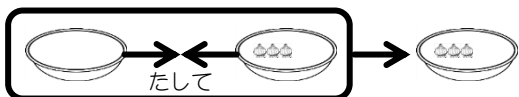
$$\square + \square = \square$$



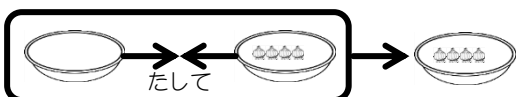
$$\square + \square = \square$$



$$\square + \square = \square$$

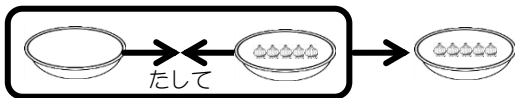


$$\square + \square = \square$$

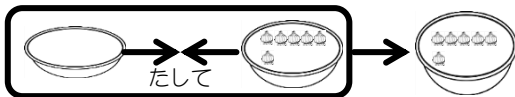


$$\square + \square = \square$$

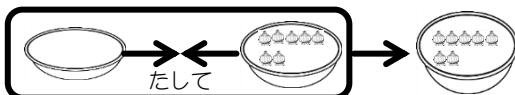
⑭



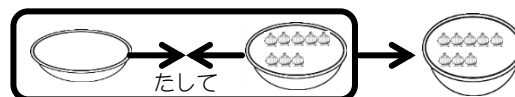
$$\square + \square = \square$$



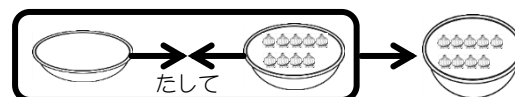
$$\square + \square = \square$$



$$\square + \square = \square$$



$$\square + \square = \square$$



$$\square + \square = \square$$