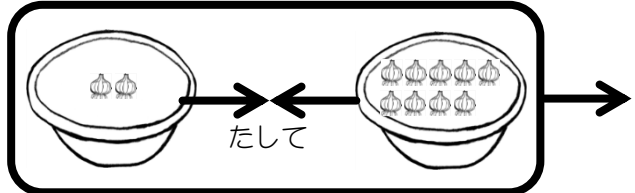


2 + 9はいくつかな？

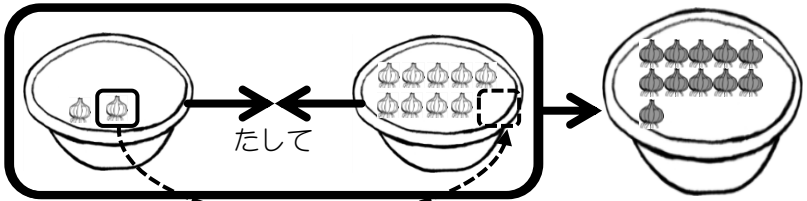
$$\boxed{2} + \boxed{9} = \boxed{}$$



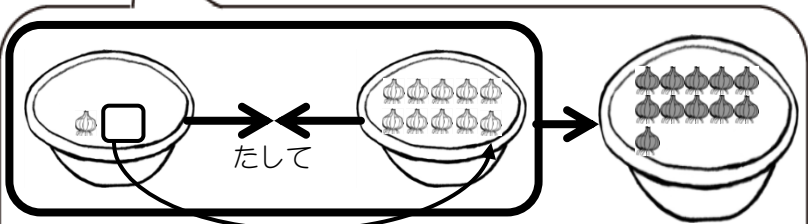
2個のうちの1個を9個にうつせばいいね。



$$\boxed{2} + \boxed{9} = \boxed{11}$$



1個うつしても1個のこるから11個になるよ。



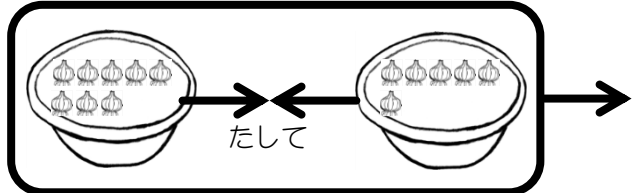
$$\boxed{1} + \boxed{10}$$



8 + 6はいくつかな？



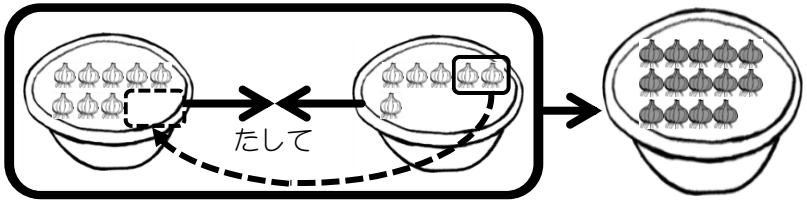
$$\boxed{8} + \boxed{6} = \boxed{}$$



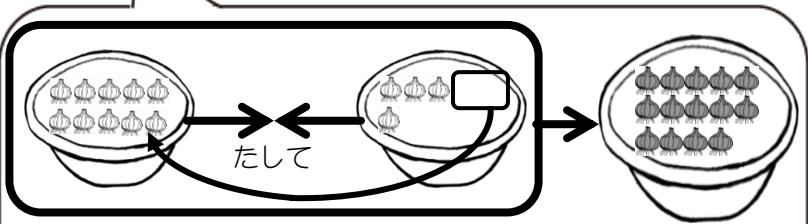
6個のうちの2個を8個にうつせばいいね。



$$\boxed{8} + \boxed{6} = \boxed{14}$$



2個うつしても4個のこるから14個になるよ。



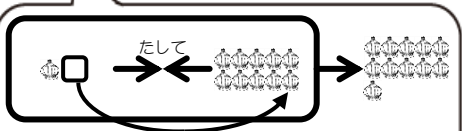
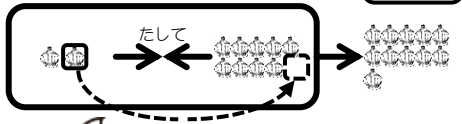
$$\boxed{10} + \boxed{4}$$





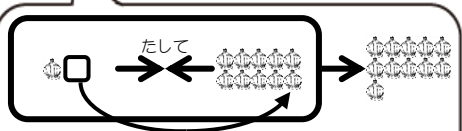
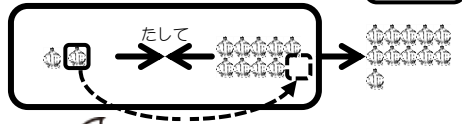
例題 たし算をしましょう。

$$\boxed{2} + \boxed{9} = \boxed{}$$



$$\boxed{1} + \boxed{10}$$

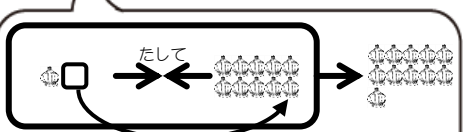
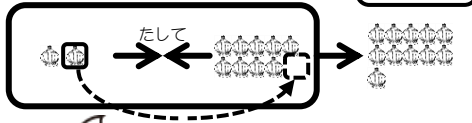
$$\boxed{2} + \boxed{9} = \boxed{11}$$



$$\boxed{1} + \boxed{10}$$

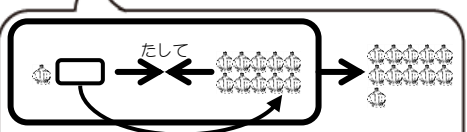
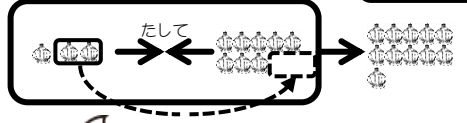
問題 たし算をしましょう。

① $\boxed{2} + \boxed{9} = \boxed{}$



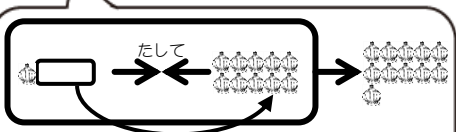
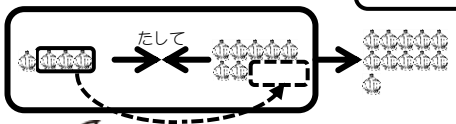
$$\boxed{1} + \boxed{10}$$

② $\boxed{3} + \boxed{8} = \boxed{}$



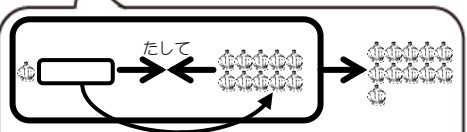
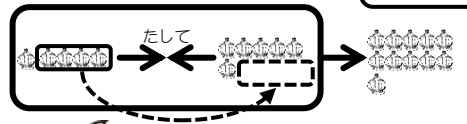
$$\boxed{2} + \boxed{10}$$

③ $\boxed{4} + \boxed{7} = \boxed{}$



$$\boxed{3} + \boxed{10}$$

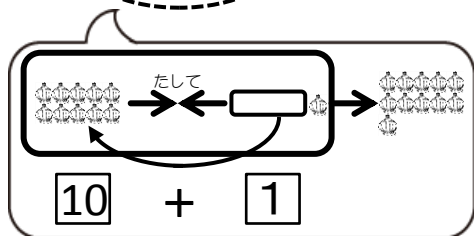
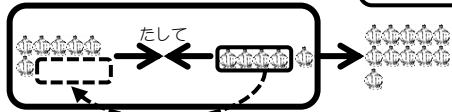
④ $\boxed{5} + \boxed{6} = \boxed{}$



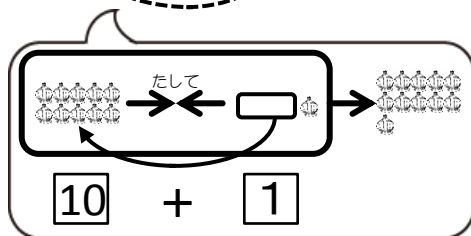
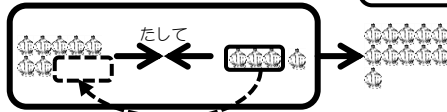
$$\boxed{4} + \boxed{10}$$

問題 たし算をしましょう。

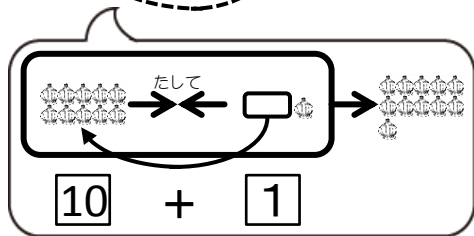
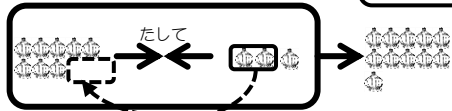
⑤ $6 + 5 = \square$



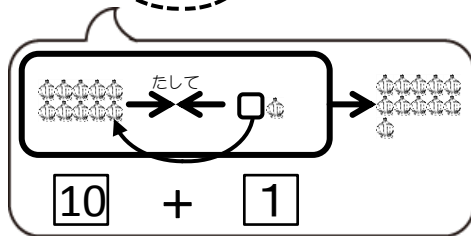
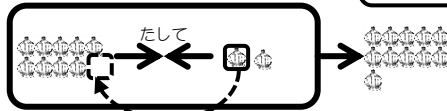
⑥ $7 + 4 = \square$



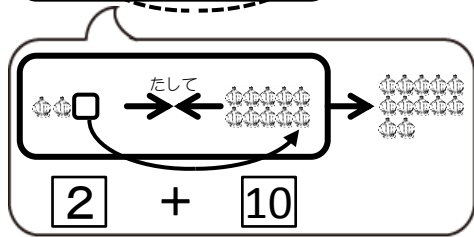
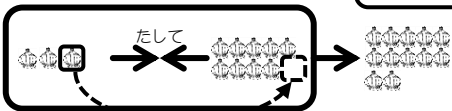
⑦ $8 + 3 = \square$



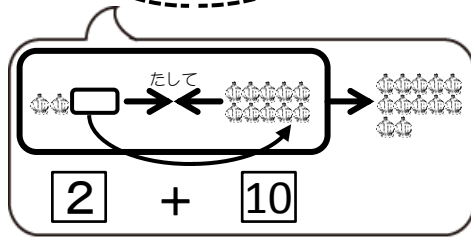
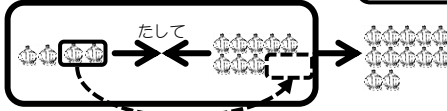
⑧ $9 + 2 = \square$



⑨ $3 + 9 = \square$

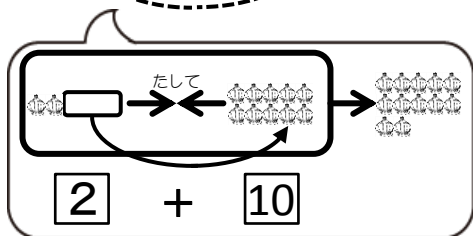
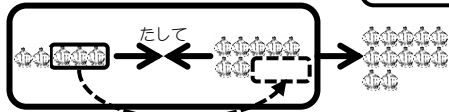


⑩ $4 + 8 = \square$

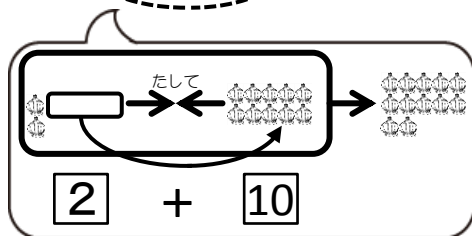
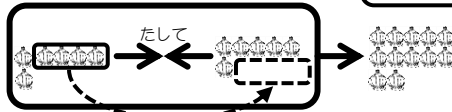


問題 たし算をしましょう。

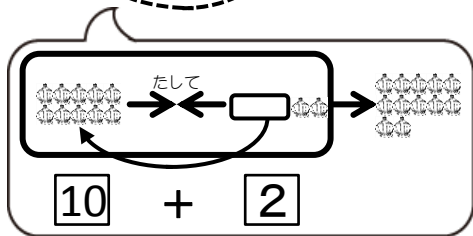
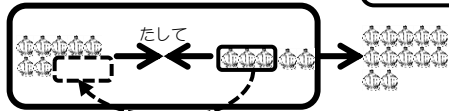
⑪ $5 + 7 = \square$



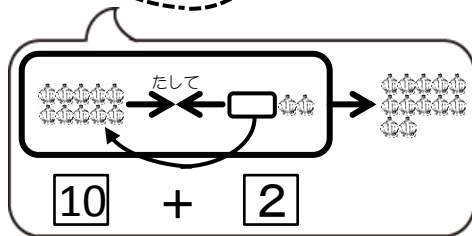
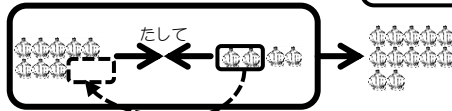
⑫ $6 + 6 = \square$



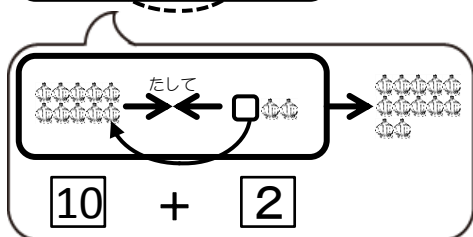
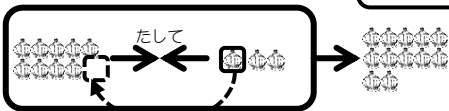
⑬ $7 + 5 = \square$



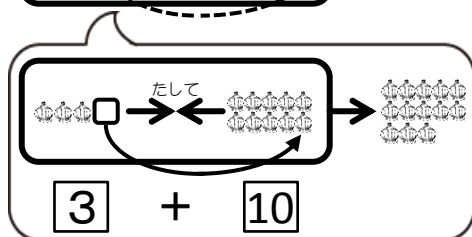
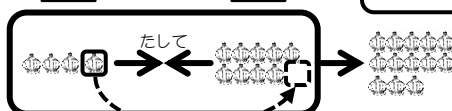
⑭ $8 + 4 = \square$



⑮ $9 + 3 = \square$

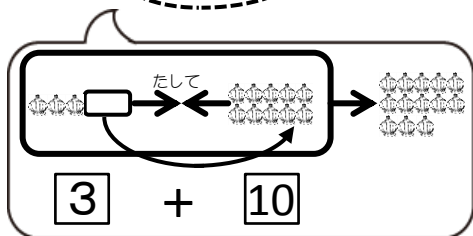
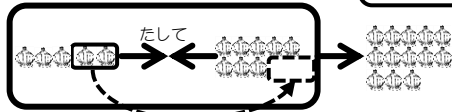


⑯ $4 + 9 = \square$

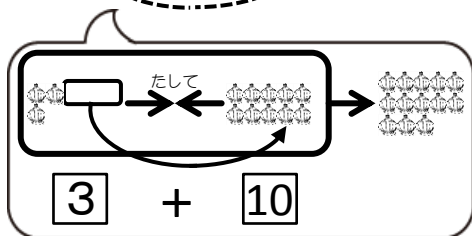
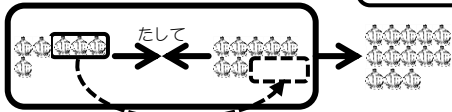


問題 たし算をしましょう。

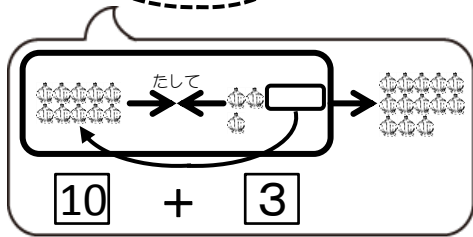
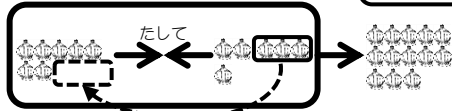
⑰ $5 + 8 = \square$



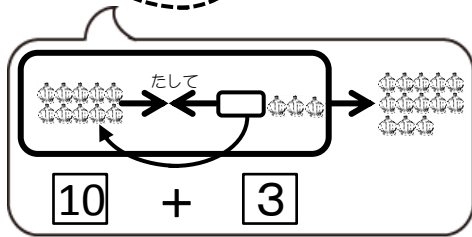
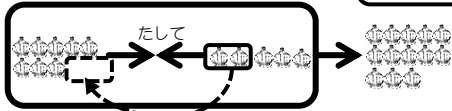
⑱ $6 + 7 = \square$



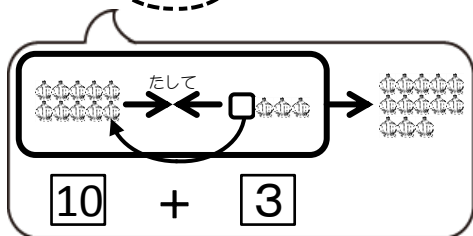
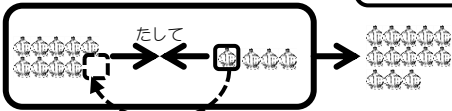
⑲ $7 + 6 = \square$



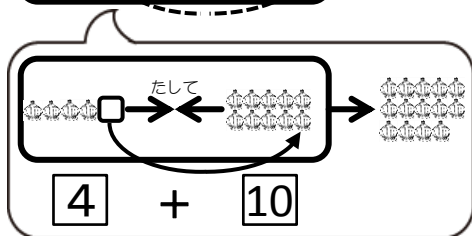
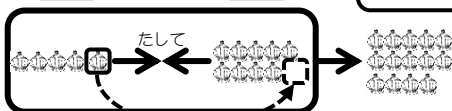
⑳ $8 + 5 = \square$



㉑ $9 + 4 = \square$

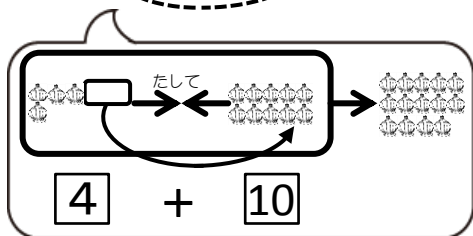
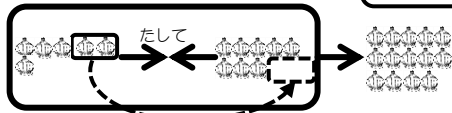


㉒ $5 + 9 = \square$

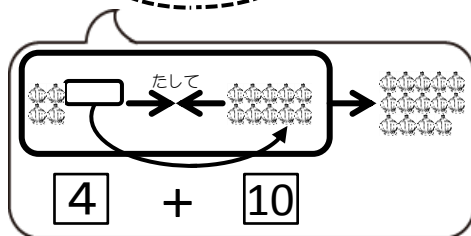
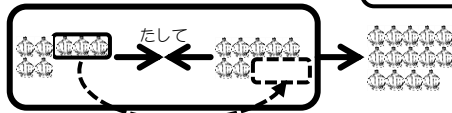


問題 たし算をしましょう。

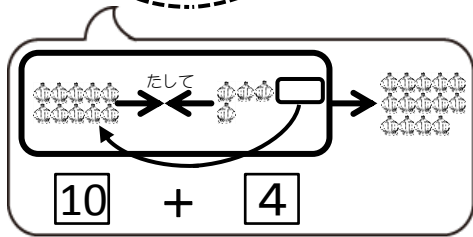
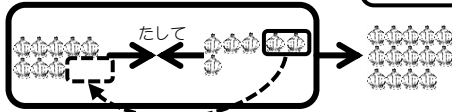
23 $6 + 8 = \square$



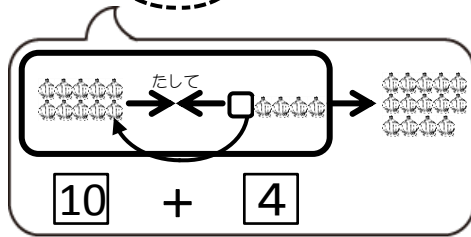
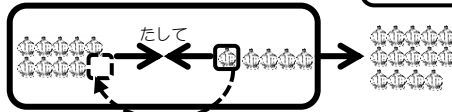
24 $7 + 7 = \square$



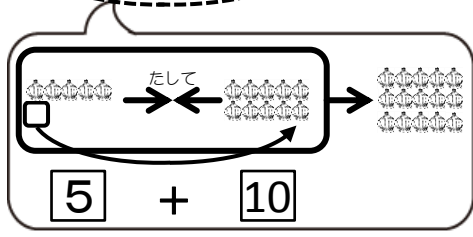
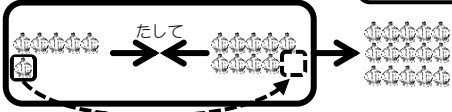
25 $8 + 6 = \square$



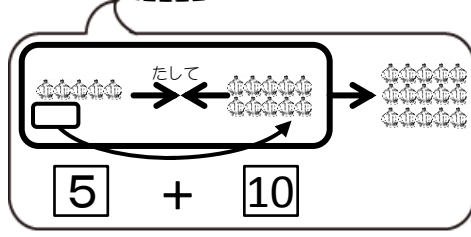
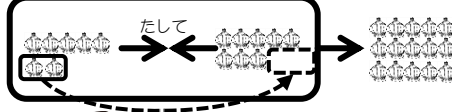
26 $9 + 5 = \square$



27 $6 + 9 = \square$

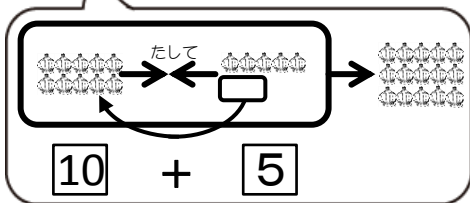
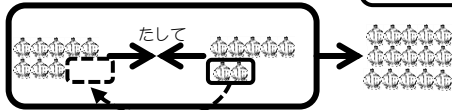


28 $7 + 8 = \square$

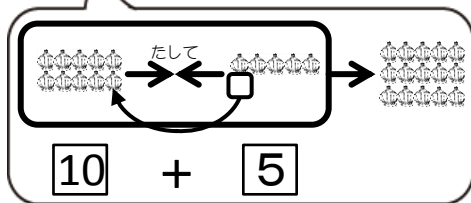
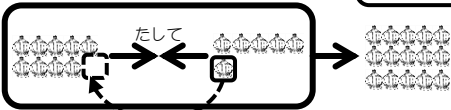


問題 たし算をしましょう。

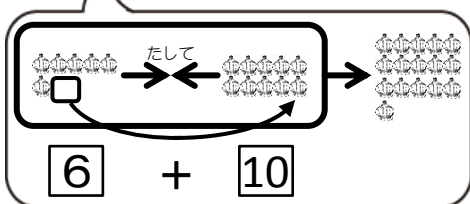
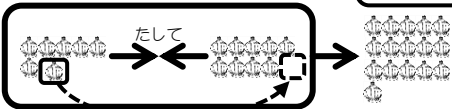
29 $8 + 7 = \square$



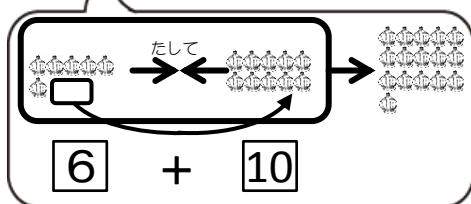
30 $9 + 6 = \square$



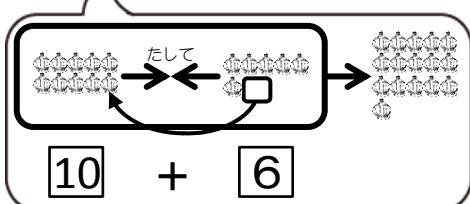
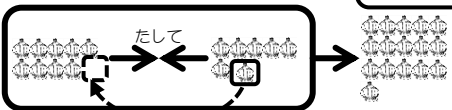
31 $7 + 9 = \square$



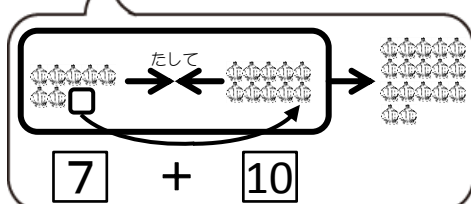
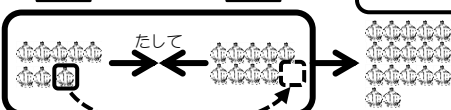
32 $8 + 8 = \square$



33 $9 + 7 = \square$

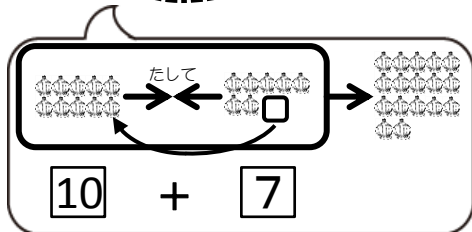
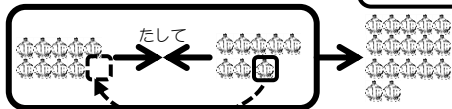


34 $8 + 9 = \square$

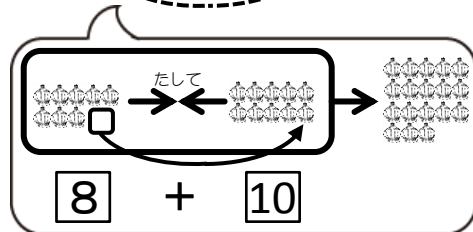


問題 たし算をしましょう。

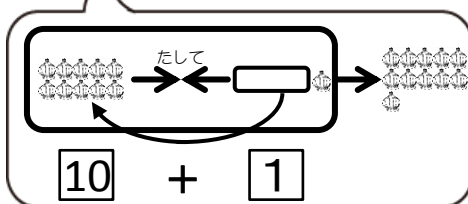
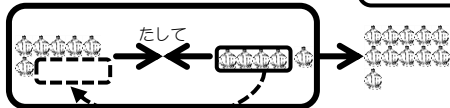
③⑤ $9 + 8 = \square$



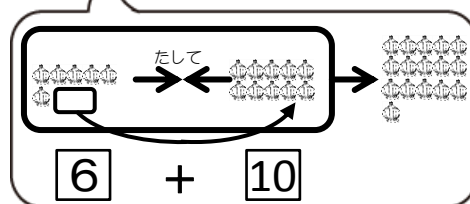
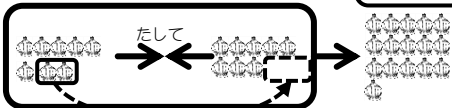
③⑥ $9 + 9 = \square$



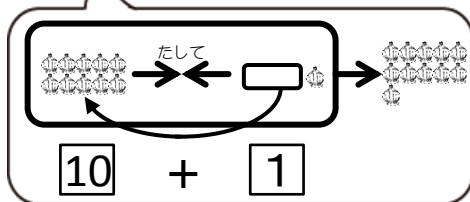
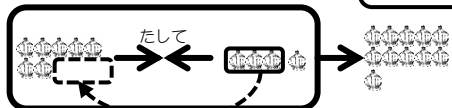
③⑦ $6 + 5 = \square$



③⑧ $8 + 8 = \square$



③⑨ $7 + 4 = \square$



④⑩ $4 + 9 = \square$

