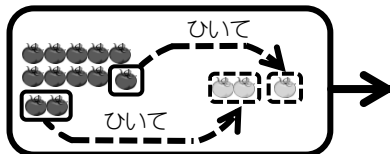
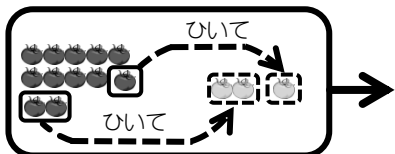


例題 ひき算をしましょう。

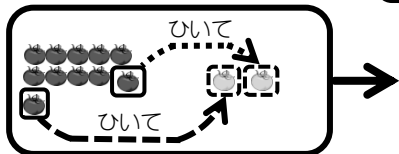


$$12 - 3 = \square \Rightarrow 12 - 3 = 9$$

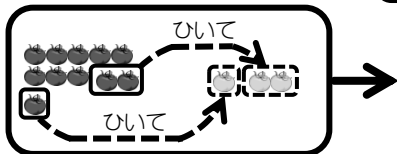


問題 ひき算をしましょう。

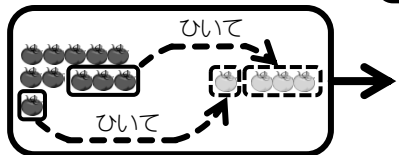
① $11 - 2 = \square$



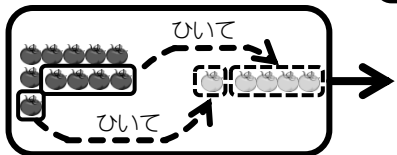
② $11 - 3 = \square$



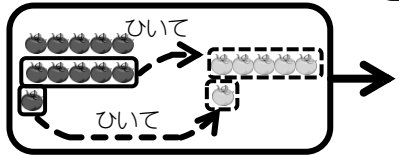
③ $11 - 4 = \square$



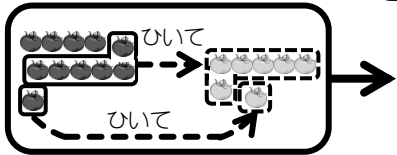
④ $11 - 5 = \square$



⑤ $11 - 6 = \square$

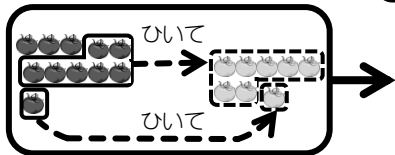


⑥ $11 - 7 = \square$

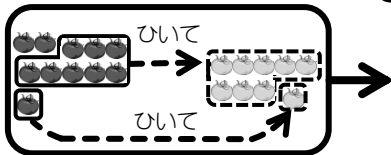


問題 ひき算をしましょう。

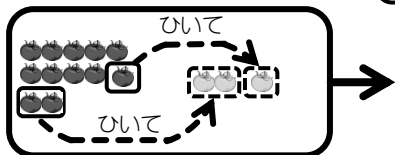
$$\textcircled{7} \quad 11 - 8 = \square$$



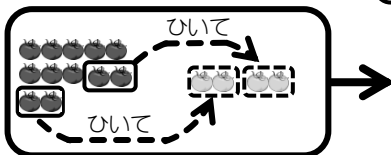
$$\textcircled{8} \quad 11 - 9 = \square$$



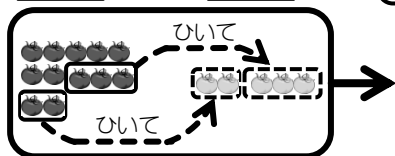
$$\textcircled{9} \quad 12 - 3 = \square$$



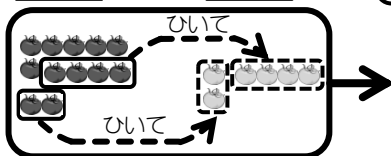
$$\textcircled{10} \quad 12 - 4 = \square$$



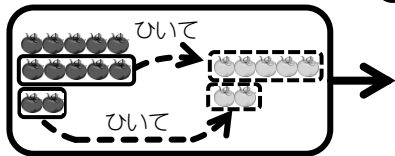
$$\textcircled{11} \quad 12 - 5 = \square$$



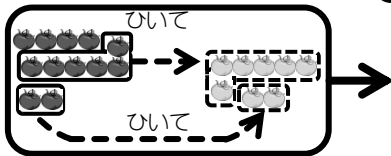
$$\textcircled{12} \quad 12 - 6 = \square$$



$$\textcircled{13} \quad 12 - 7 = \square$$

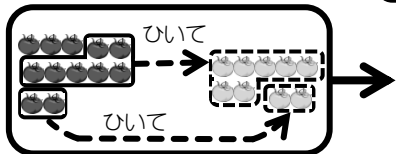


$$\textcircled{14} \quad 12 - 8 = \square$$

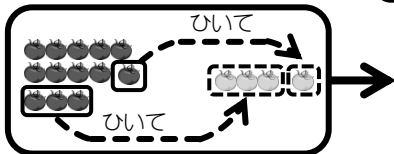


問題 ひき算をしましょう。

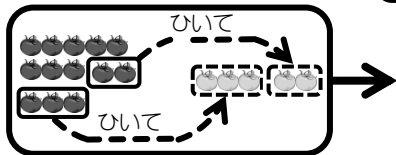
$$15 \quad 12 - 9 = \square$$



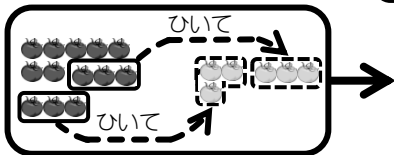
$$16 \quad 13 - 4 = \square$$



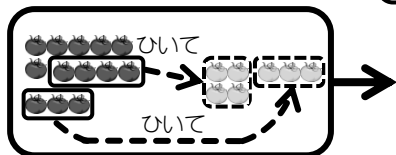
$$17 \quad 13 - 5 = \square$$



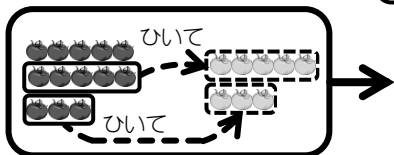
$$18 \quad 13 - 6 = \square$$



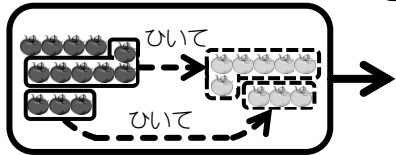
$$19 \quad 13 - 7 = \square$$



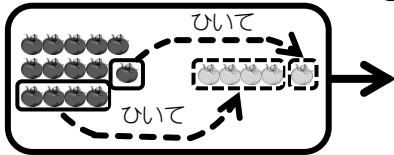
$$20 \quad 13 - 8 = \square$$



$$21 \quad 13 - 9 = \square$$

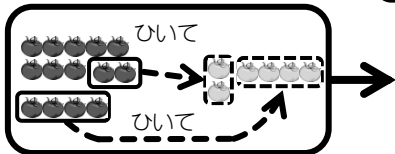


$$22 \quad 14 - 5 = \square$$

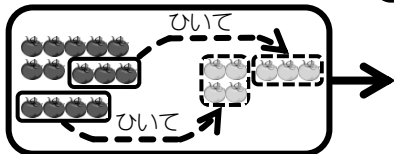


問題 ひき算をしましょう。

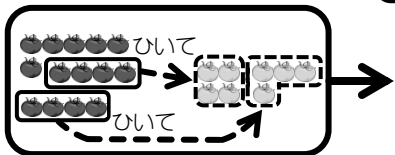
$$\textcircled{23} \quad 14 - 6 = \square$$



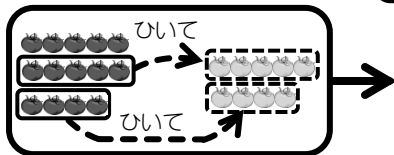
$$\textcircled{24} \quad 14 - 7 = \square$$



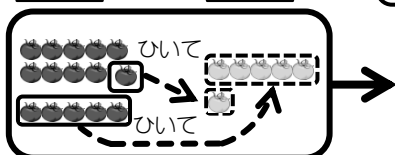
$$\textcircled{25} \quad 14 - 8 = \square$$



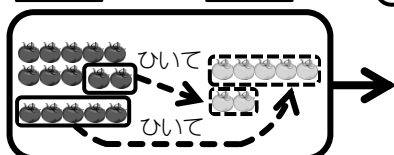
$$\textcircled{26} \quad 14 - 9 = \square$$



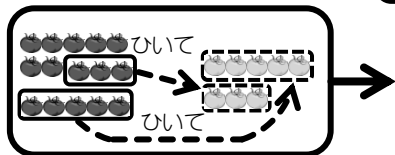
$$\textcircled{27} \quad 15 - 6 = \square$$



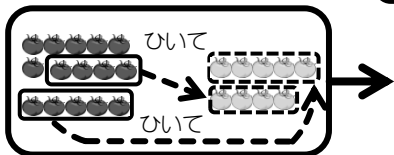
$$\textcircled{28} \quad 15 - 7 = \square$$



$$\textcircled{29} \quad 15 - 8 = \square$$

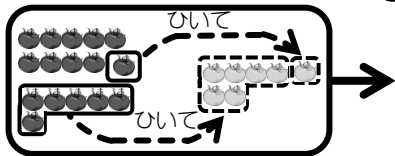


$$\textcircled{30} \quad 15 - 9 = \square$$

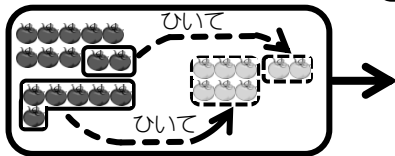


問題 ひき算をしましょう。

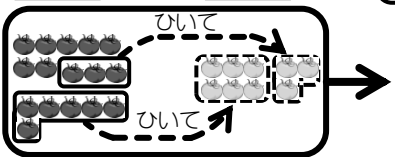
$$\textcircled{31} \quad 16 - 7 = \square$$



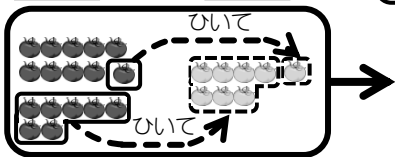
$$\textcircled{32} \quad 16 - 8 = \square$$



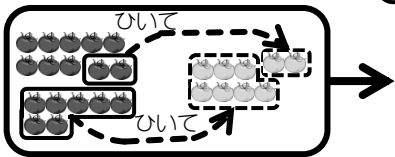
$$\textcircled{33} \quad 16 - 9 = \square$$



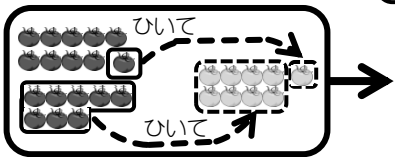
$$\textcircled{34} \quad 17 - 8 = \square$$



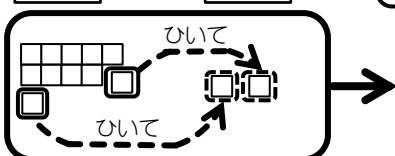
$$\textcircled{35} \quad 17 - 9 = \square$$



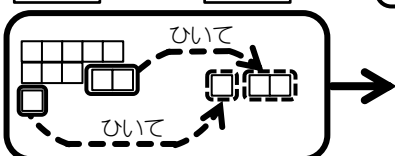
$$\textcircled{36} \quad 18 - 9 = \square$$



$$\textcircled{37} \quad 11 - 2 = \square$$

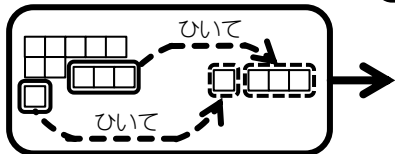


$$\textcircled{38} \quad 11 - 3 = \square$$

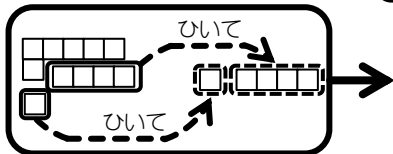


問題 ひき算をしましょう。

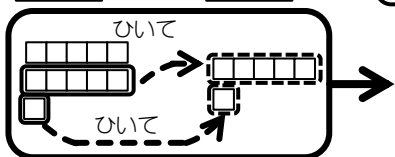
$$39 \quad 11 - 4 = \square$$



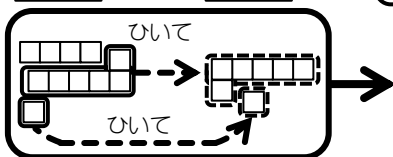
$$40 \quad 11 - 5 = \square$$



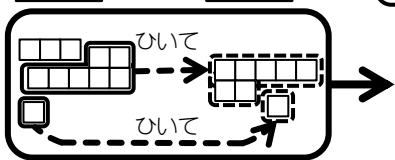
$$41 \quad 11 - 6 = \square$$



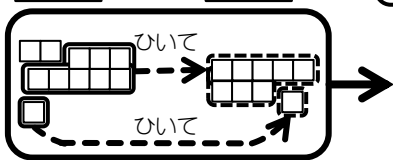
$$42 \quad 11 - 7 = \square$$



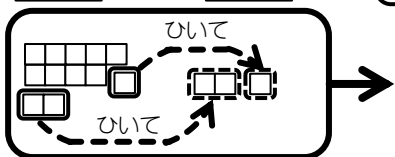
$$43 \quad 11 - 8 = \square$$



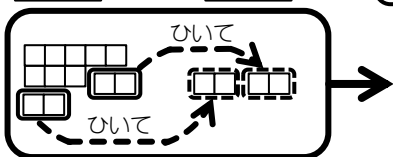
$$44 \quad 11 - 9 = \square$$



$$45 \quad 12 - 3 = \square$$

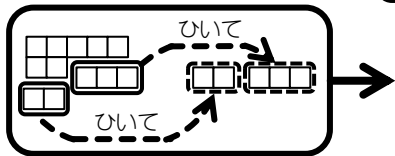


$$46 \quad 12 - 4 = \square$$

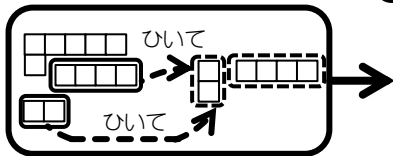


問題 ひき算をしましょう。

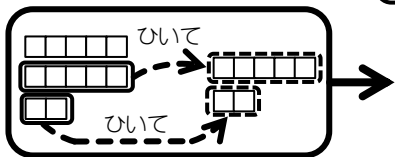
$$47 \quad 12 - 5 = \square$$



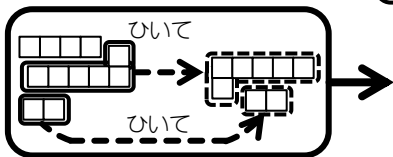
$$48 \quad 12 - 6 = \square$$



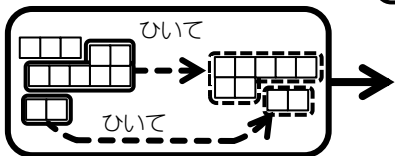
$$49 \quad 12 - 7 = \square$$



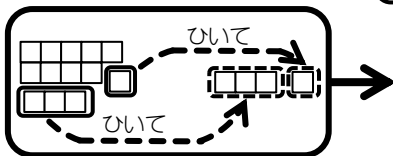
$$50 \quad 12 - 8 = \square$$



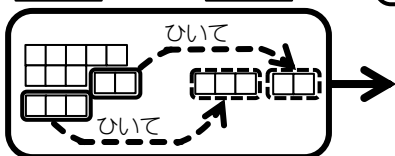
$$51 \quad 12 - 9 = \square$$



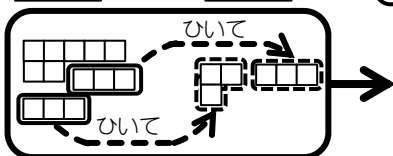
$$52 \quad 13 - 4 = \square$$



$$53 \quad 13 - 5 = \square$$

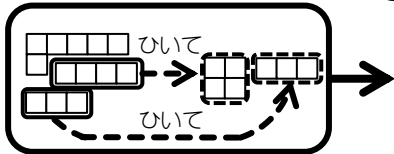


$$54 \quad 13 - 6 = \square$$

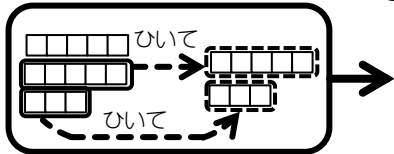


問題 ひき算をしましょう。

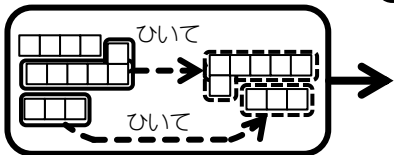
⑤⑤ $13 - 7 = \square$



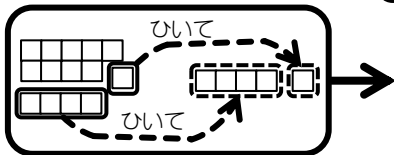
⑤⑥ $13 - 8 = \square$



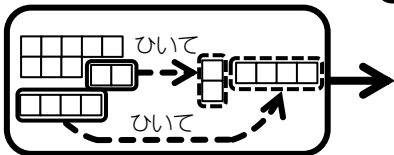
⑤⑦ $13 - 9 = \square$



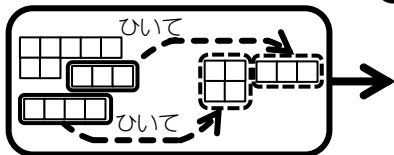
⑤⑧ $14 - 5 = \square$



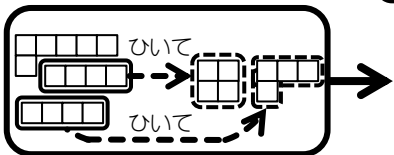
⑤⑨ $14 - 6 = \square$



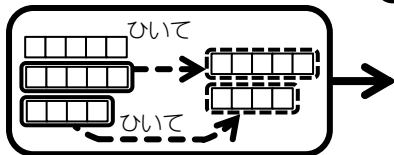
⑥⑩ $14 - 7 = \square$



⑥① $14 - 8 = \square$

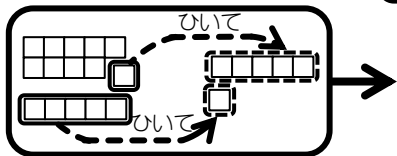


⑥② $14 - 9 = \square$

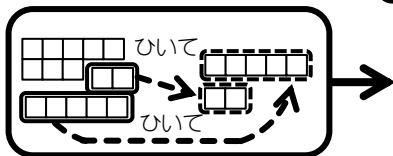


問題 ひき算をしましょう。

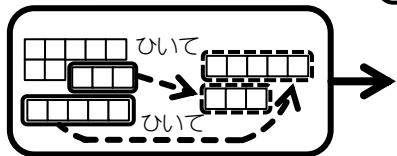
$$\textcircled{63} \quad 15 - 6 = \square$$



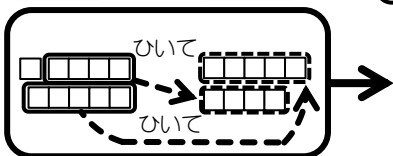
$$\textcircled{64} \quad 15 - 7 = \square$$



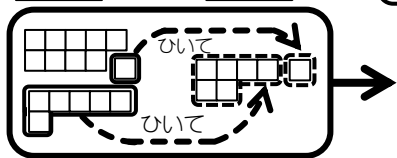
$$\textcircled{65} \quad 15 - 8 = \square$$



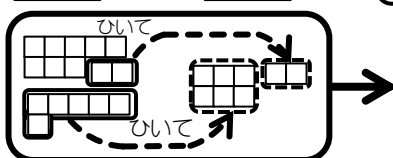
$$\textcircled{66} \quad 15 - 9 = \square$$



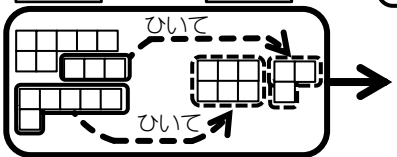
$$\textcircled{67} \quad 16 - 7 = \square$$



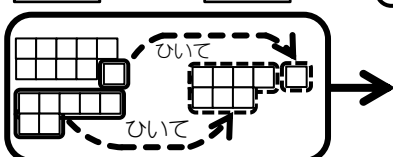
$$\textcircled{68} \quad 16 - 8 = \square$$



$$\textcircled{69} \quad 16 - 9 = \square$$

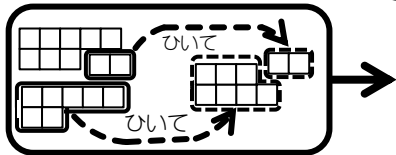


$$\textcircled{70} \quad 17 - 8 = \square$$

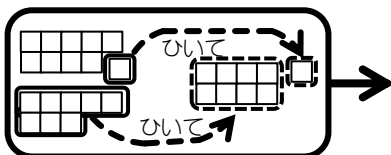


問題 ひき算をしましょう。

$$\textcircled{71} \quad 17 - 9 = \square$$



$$\textcircled{72} \quad 18 - 9 = \square$$



$$\textcircled{73} \quad 11 - 2 = \square$$

$$\textcircled{74} \quad 11 - 3 = \square$$

$$\textcircled{75} \quad 11 - 4 = \square$$

$$\textcircled{76} \quad 11 - 5 = \square$$

$$\textcircled{77} \quad 11 - 6 = \square$$

$$\textcircled{78} \quad 11 - 7 = \square$$

$$\textcircled{79} \quad 11 - 8 = \square$$

$$\textcircled{80} \quad 11 - 9 = \square$$

$$\textcircled{81} \quad 12 - 3 = \square$$

$$\textcircled{82} \quad 12 - 4 = \square$$

$$\textcircled{83} \quad 12 - 5 = \square$$

$$\textcircled{84} \quad 12 - 6 = \square$$

$$\textcircled{85} \quad 12 - 7 = \square$$

$$\textcircled{86} \quad 12 - 8 = \square$$

$$\textcircled{87} \quad 12 - 9 = \square$$

$$\textcircled{88} \quad 13 - 4 = \square$$

$$\textcircled{89} \quad 13 - 5 = \square$$

$$\textcircled{90} \quad 13 - 6 = \square$$

問題 ひき算をしましょう。

$$\textcircled{91} \quad 13 - 7 = \square$$

$$\textcircled{92} \quad 13 - 8 = \square$$

$$\textcircled{93} \quad 13 - 9 = \square$$

$$\textcircled{94} \quad 14 - 5 = \square$$

$$\textcircled{95} \quad 14 - 6 = \square$$

$$\textcircled{96} \quad 14 - 7 = \square$$

$$\textcircled{97} \quad 14 - 8 = \square$$

$$\textcircled{98} \quad 14 - 9 = \square$$

$$\textcircled{99} \quad 15 - 6 = \square$$

$$\textcircled{100} \quad 15 - 7 = \square$$

$$\textcircled{101} \quad 15 - 8 = \square$$

$$\textcircled{102} \quad 15 - 9 = \square$$

$$\textcircled{103} \quad 16 - 7 = \square$$



$$\textcircled{104} \quad 16 - 8 = \square$$

$$\textcircled{105} \quad 16 - 9 = \square$$

$$\textcircled{106} \quad 17 - 8 = \square$$

$$\textcircled{107} \quad 17 - 9 = \square$$

$$\textcircled{108} \quad 18 - 9 = \square$$



問題 ひき算をしましょう。

$109 \quad 14 - 8 = \square$

$110 \quad 12 - 7 = \square$

$111 \quad 15 - 6 = \square$

$112 \quad 11 - 3 = \square$

$113 \quad 12 - 4 = \square$

$114 \quad 17 - 9 = \square$

$115 \quad 11 - 6 = \square$

$116 \quad 15 - 7 = \square$

$117 \quad 16 - 8 = \square$

$118 \quad 12 - 5 = \square$

$119 \quad 13 - 7 = \square$

$120 \quad 11 - 6 = \square$

$121 \quad 14 - 5 = \square$

$122 \quad 13 - 8 = \square$

$123 \quad 18 - 9 = \square$

$124 \quad 15 - 8 = \square$

$125 \quad 11 - 7 = \square$

$126 \quad 11 - 4 = \square$

$127 \quad 12 - 9 = \square$

$128 \quad 16 - 9 = \square$

$129 \quad 14 - 9 = \square$

$130 \quad 12 - 8 = \square$

$131 \quad 13 - 5 = \square$

$132 \quad 14 - 7 = \square$