

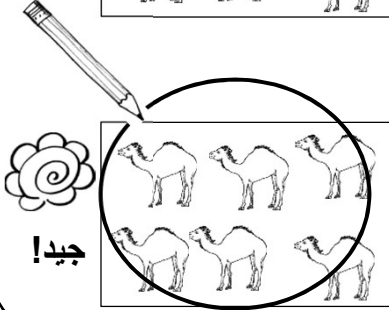








مثال دعونا نرسم حول العنصر المُنتطبق.

أيهم ٦ ؟



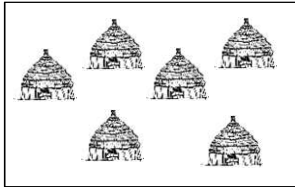


السؤال دعونا نرسم حول العنصر المُنتطبق.

(١) أيهم ٦ ؟




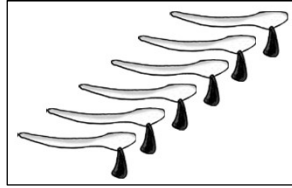

(٢) أيهم ٧ ؟



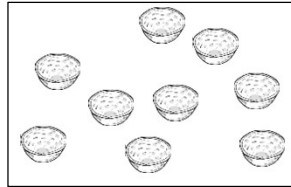


T.٤_S٤

السؤال دعونا نرسم ○ حول العنصر المنطبق.



(٣) أيهم ٨ ؟




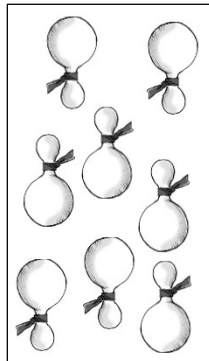

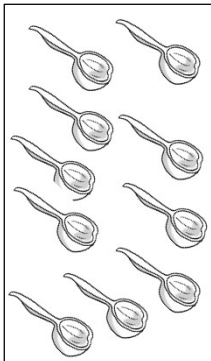
(٤) أيهم ٩ ؟



(٥) أيهم ١٠ ؟



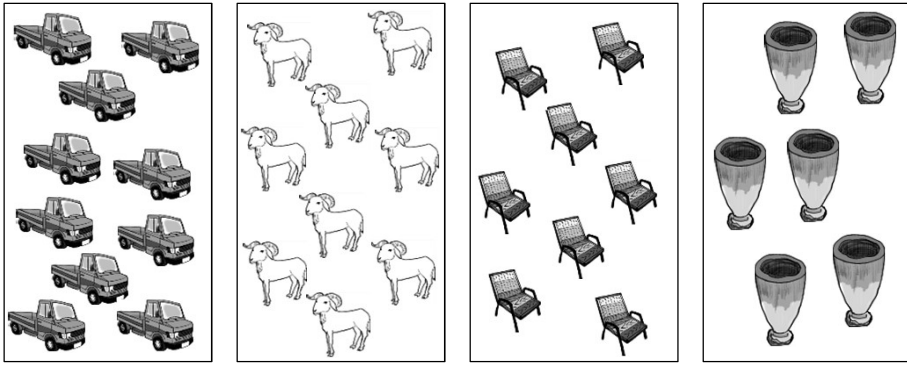
(٦) أيهم ٨ ؟



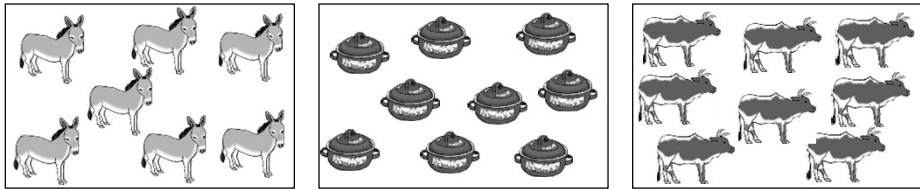
T.٤_S٤

السؤال دعونا نرسم ○ حول العنصر المُنتطق.

(٧) أيهم ١٠ ؟



(٨) أيهم ٧ ؟



(٩) أيهم ٩ ؟

