

مثال دعونا نطرح.

←

←

□ = 2 - 5

جيدا!



السؤال دعونا نطرح.

(1)

(2)

←

←

←

←

←

←

←

←

السؤال دعونا نطرح.

(٣)

□ = ١ - ٩

(٤)

□ = ٢ - ٢

□ = ٢ - ٣

□ = ٢ - ٤

□ = ٢ - ٥

(٥)

□ = ٢ - ٦

□ = ٢ - ٧

□ = ٢ - ٨

□ = ٢ - ٩

السؤال دعونا نطرح.

(٦)

	$\square = 3 - 3$
	$\square = 3 - 4$
	$\square = 3 - 5$
	$\square = 3 - 6$
	$\square = 3 - 7$

(٧)

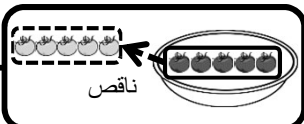
	$\square = 3 - 8$
	$\square = 3 - 9$

(٨)

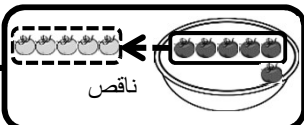
	$\square = 4 - 4$
	$\square = 4 - 5$
	$\square = 4 - 6$

السؤال دعونا نطرح.

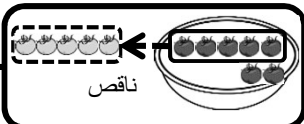
(١٠)



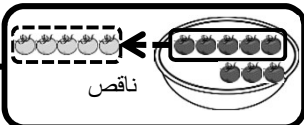
 = ٥ - ٥



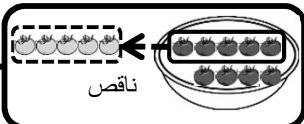
 = ٥ - ٦



 = ٥ - ٧

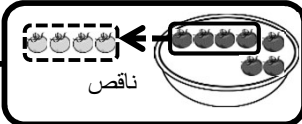


 = ٥ - ٨

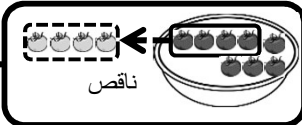


 = ٥ - ٩

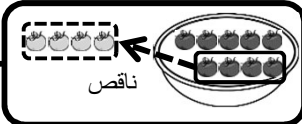
(٩)



 = ٤ - ٧

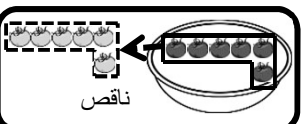


 = ٤ - ٨

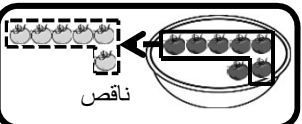


 = ٤ - ٩

(١١)



 = ٦ - ٦



 = ٦ - ٧

السؤال دعونا نطرح.

(١٣)

= ٧ - ٧

= ٧ - ٨

= ٧ - ٩

(١٥)

= ٩ - ٩

(١٢)

= ٦ - ٨

= ٦ - ٩

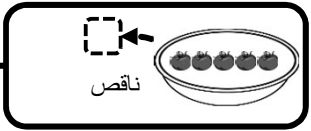
(١٤)

= ٨ - ٨

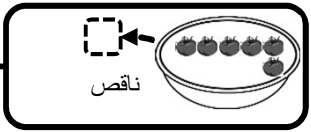
= ٨ - ٩



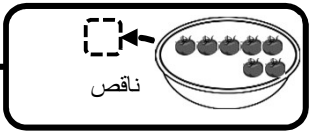
(١٧)



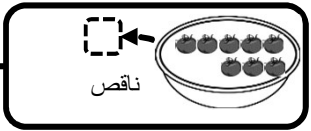
 = -



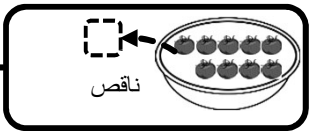
 = -



 = -

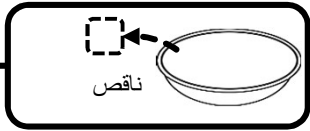


 = -

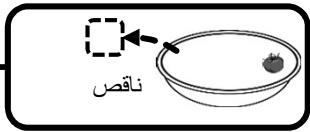


 = -

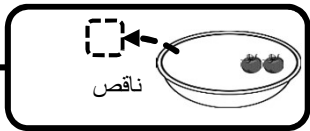
(١٦)



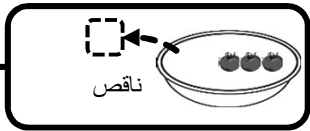
 = -



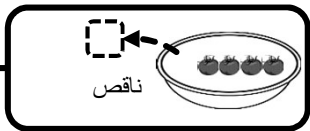
 = -



 = -



 = -



 = -