

مثال دعونا نطرح.

3 = 2 - 5

□ = 2 - 5

ناقص

جيدا!

السؤال دعونا نطرح.

(٢)

(١)

□ = 1 - 5

□ = 1 - 6

□ = 1 - 7

□ = 1 - 8

ناقص

□ = 1 - 1

□ = 1 - 2

□ = 1 - 3

□ = 1 - 4

ناقص

السؤال دعونا نطرح.

(٣)



(٥)

Diagram showing a ten-frame with 9 blocks and 1 block being removed, labeled "ناقص". Below it is the equation: $\square = 1 - 9$.

(٤)

Diagram showing a ten-frame with 6 blocks and 2 blocks being removed, labeled "ناقص". Below it is the equation: $\square = 2 - 6$.

Diagram showing a ten-frame with 7 blocks and 2 blocks being removed, labeled "ناقص". Below it is the equation: $\square = 2 - 7$.

Diagram showing a ten-frame with 8 blocks and 2 blocks being removed, labeled "ناقص". Below it is the equation: $\square = 2 - 8$.

Diagram showing a ten-frame with 9 blocks and 2 blocks being removed, labeled "ناقص". Below it is the equation: $\square = 2 - 9$.

Diagram showing a ten-frame with 2 blocks and 2 blocks being removed, labeled "ناقص". Below it is the equation: $\square = 2 - 2$.

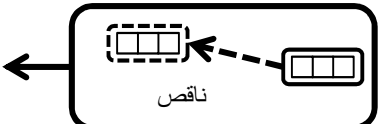
Diagram showing a ten-frame with 3 blocks and 2 blocks being removed, labeled "ناقص". Below it is the equation: $\square = 2 - 3$.

Diagram showing a ten-frame with 4 blocks and 2 blocks being removed, labeled "ناقص". Below it is the equation: $\square = 2 - 4$.

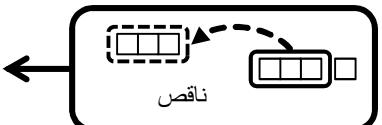
Diagram showing a ten-frame with 5 blocks and 2 blocks being removed, labeled "ناقص". Below it is the equation: $\square = 2 - 5$.

السؤال دعونا نطرح.

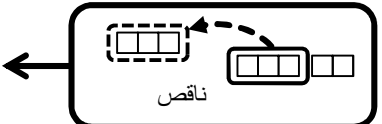
(٦)



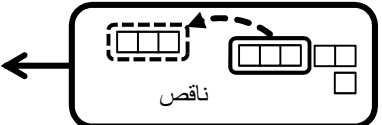
 $\square = 3 - 3$



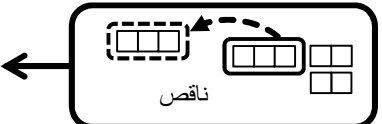
 $\square = 3 - 4$



 $\square = 3 - 5$

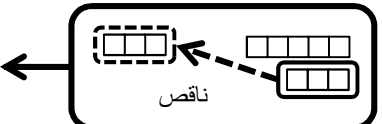


 $\square = 3 - 6$

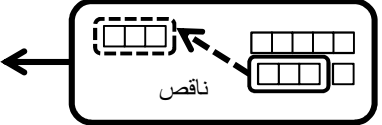


 $\square = 3 - 7$

(٧)

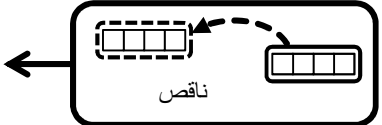


 $\square = 3 - 8$

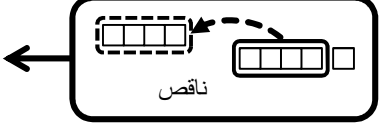


 $\square = 3 - 9$

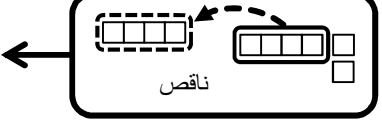
(٨)



 $\square = 4 - 4$

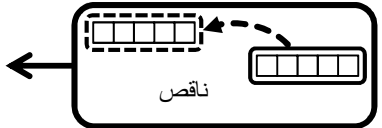


 $\square = 4 - 5$

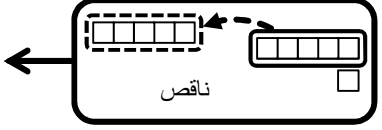


 $\square = 4 - 6$

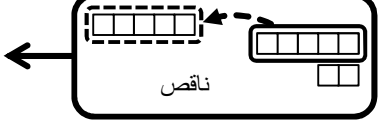
(١٠)



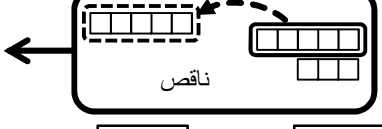
 = ٥ - ٥




 = ٥ - ٦



 = ٥ - ٧

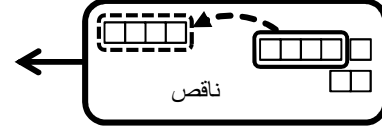


 = ٥ - ٨




 = ٥ - ٩


(٩)



 = ٤ - ٧

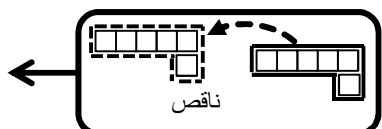


 = ٤ - ٨




 = ٤ - ٩

(١١)



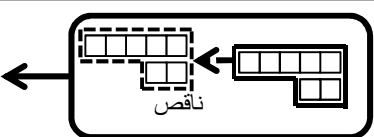
 = ٦ - ٦



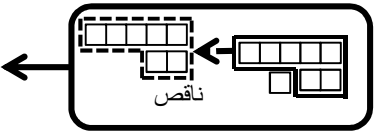
 = ٦ - ٧

السؤال دعونا نطرح.

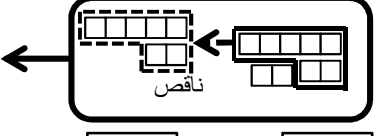
(١٣)



 = ٧ - ٧

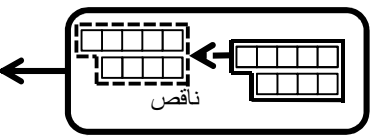


 = ٧ - ٨



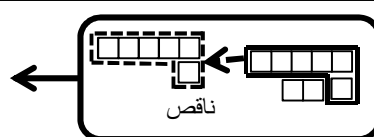
 = ٧ - ٩

(١٥)

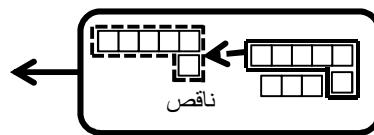


 = ٩ - ٩

(١٢)

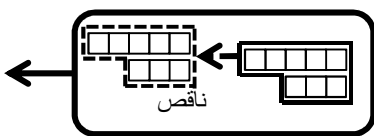


 = ٦ - ٨

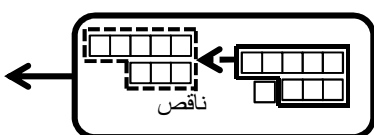


 = ٦ - ٩

(١٤)



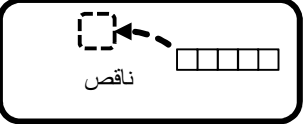
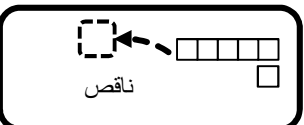
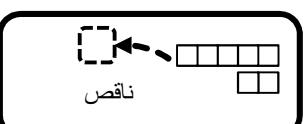
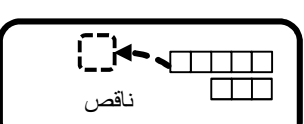
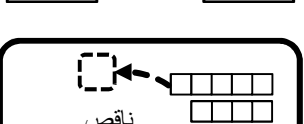
 = ٨ - ٨







 = ٨ - ٩



(١٧)

<input type="text"/>	=	<input type="text"/>	-	<input type="text"/>	← 
<input type="text"/>	=	<input type="text"/>	-	<input type="text"/>	← 
<input type="text"/>	=	<input type="text"/>	-	<input type="text"/>	← 
<input type="text"/>	=	<input type="text"/>	-	<input type="text"/>	← 
<input type="text"/>	=	<input type="text"/>	-	<input type="text"/>	← 

(١٦)

<input type="text"/>	=	<input type="text"/>	-	<input type="text"/>	← 
<input type="text"/>	=	<input type="text"/>	-	<input type="text"/>	← 
<input type="text"/>	=	<input type="text"/>	-	<input type="text"/>	← 
<input type="text"/>	=	<input type="text"/>	-	<input type="text"/>	← 
<input type="text"/>	=	<input type="text"/>	-	<input type="text"/>	← 