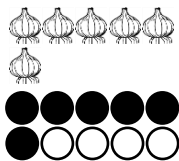
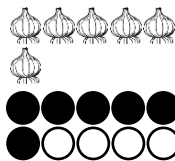


例題 玉ネギの数を表す正しい数字に○を書きましょう。



6 2

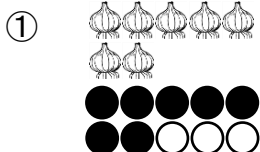


6 2

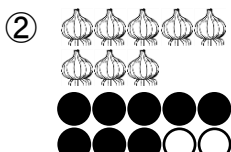


Bien!

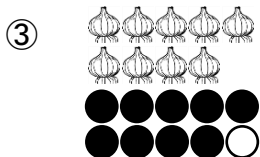
問題 玉ネギの数を表す正しい数字に○を書きましょう。



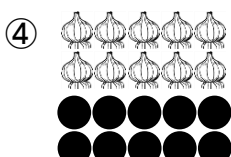
7 7



8 8

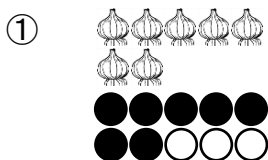


9 9

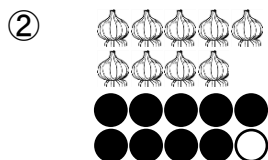


10 01

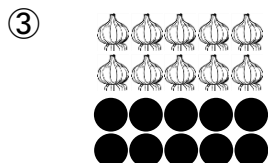
問題 玉ネギの数を表す正しい数字に○を書きましょう。



7 8 7 2 3



7 9 6 9 8



10 6 7 9 01