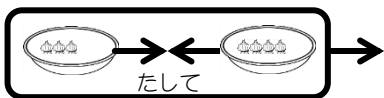


**例題** たし算をしましょう。



$$3 + 4 = \square$$



$$3 + 4 = 7$$

**問題** たし算をしましょう。



①



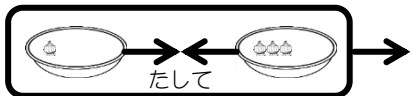
$$1 + 0 = \square$$



$$1 + 1 = \square$$



$$1 + 2 = \square$$



$$1 + 3 = \square$$

②



$$1 + 4 = \square$$



$$1 + 5 = \square$$



$$1 + 6 = \square$$




$$1 + 7 = \square$$

## 問題

たし算をしましょう。

③

1 + 8 =



④

2 + 0 =

2 + 1 =

2 + 2 =

2 + 3 =

⑤

2 + 4 =

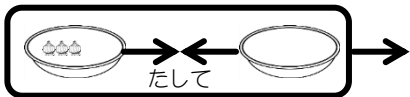
2 + 5 =

2 + 6 =

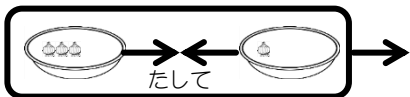
2 + 7 =

問題 たし算をしましょう。

⑥



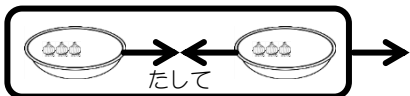
$$3 + 0 = \square$$



$$3 + 1 = \square$$



$$3 + 2 = \square$$



$$3 + 3 = \square$$

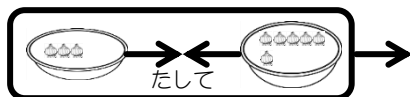


$$3 + 4 = \square$$

⑦

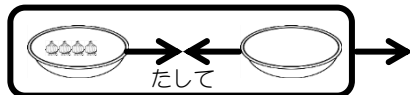


$$3 + 5 = \square$$

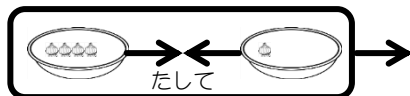


$$3 + 6 = \square$$

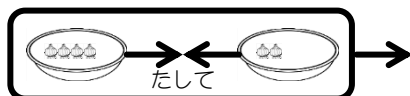
⑧



$$4 + 0 = \square$$



$$4 + 1 = \square$$



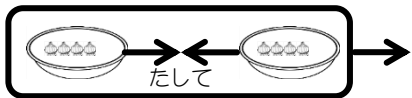
$$4 + 2 = \square$$

問題 たし算をしましょう。

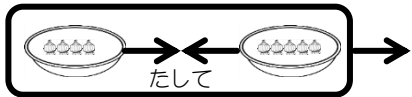
⑨



$$4 + 3 = \square$$

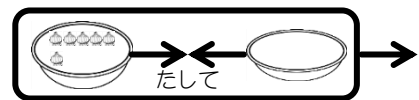


$$4 + 4 = \square$$



$$4 + 5 = \square$$

⑩

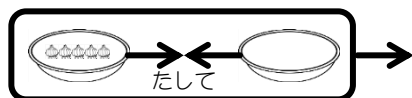


$$6 + 0 = \square$$

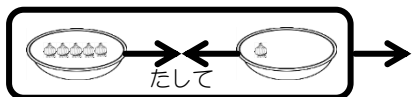


$$6 + 1 = \square$$

⑪



$$5 + 0 = \square$$



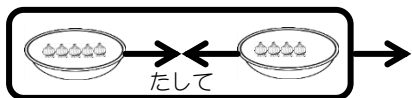
$$5 + 1 = \square$$



$$5 + 2 = \square$$



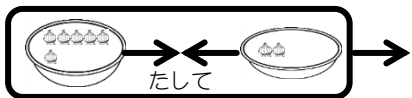
$$5 + 3 = \square$$



$$5 + 4 = \square$$

問題 たし算をしましょう。

⑫



$$6 + 2 = \square$$

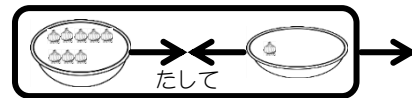


$$6 + 3 = \square$$

⑬

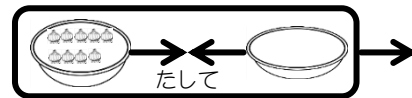


$$8 + 0 = \square$$



$$8 + 1 = \square$$

⑭



$$9 + 0 = \square$$

⑮





$$7 + 0 = \square$$



$$7 + 1 = \square$$



$$7 + 2 = \square$$



## 問題

たし算をしましょう。

⑬



$$0 + 0 = \square$$



$$0 + 1 = \square$$



$$0 + 2 = \square$$

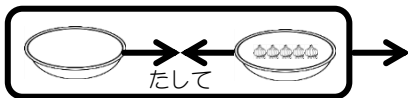


$$0 + 3 = \square$$



$$0 + 4 = \square$$

⑭



$$0 + 5 = \square$$



$$0 + 6 = \square$$



$$0 + 7 = \square$$



$$0 + 8 = \square$$



$$0 + 9 = \square$$