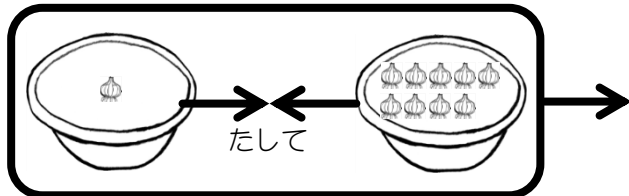


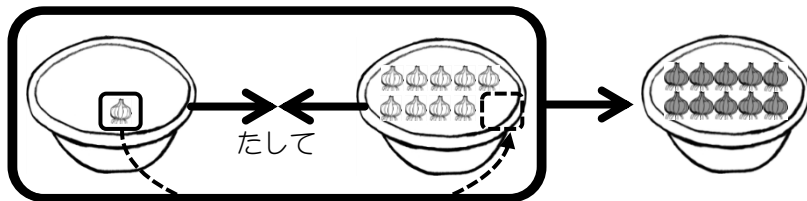
1 + 9はいくつかな？

$$\boxed{1} + \boxed{9} = \boxed{\phantom{00}}$$

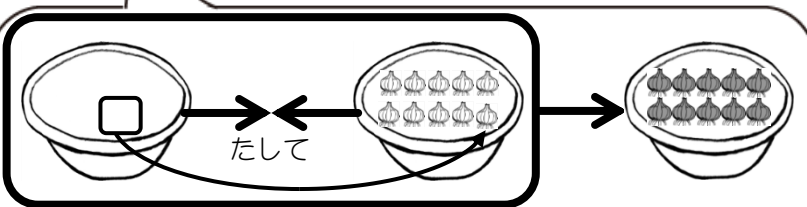


1個を9個にうつしてみればいいね。

$$\boxed{1} + \boxed{9} = \boxed{10}$$



1個うつすと  
10個になる！



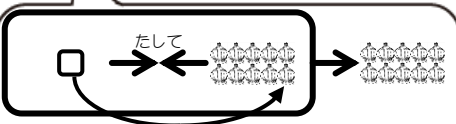
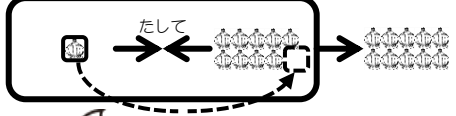
$$\boxed{0} + \boxed{10}$$





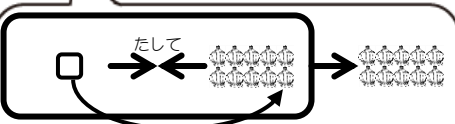
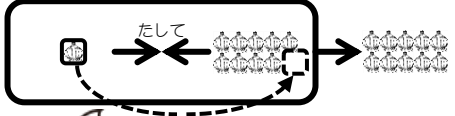
**例題** たし算をしましょう。

$$\boxed{1} + \boxed{9} = \boxed{\phantom{00}}$$



$$\boxed{0} + \boxed{10}$$

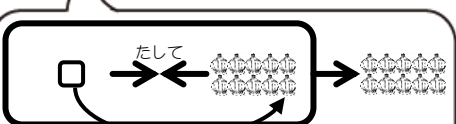
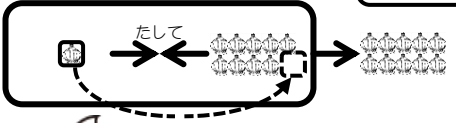
$$\boxed{1} + \boxed{9} = \boxed{10}$$



$$\boxed{0} + \boxed{10}$$

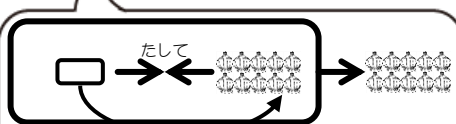
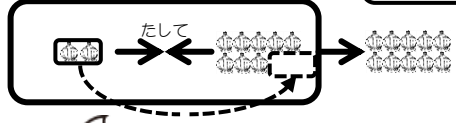
**問題** たし算をしましょう。

①  $\boxed{1} + \boxed{9} = \boxed{\phantom{00}}$



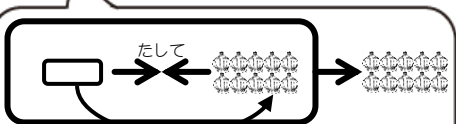
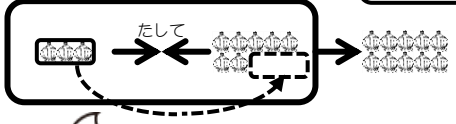
$$\boxed{0} + \boxed{10}$$

②  $\boxed{2} + \boxed{8} = \boxed{\phantom{00}}$



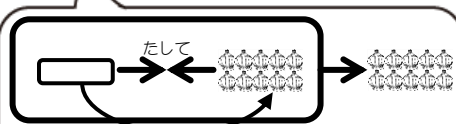
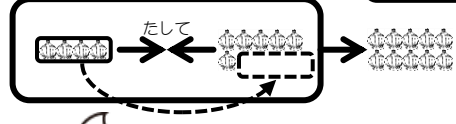
$$\boxed{0} + \boxed{10}$$

③  $\boxed{3} + \boxed{7} = \boxed{\phantom{00}}$



$$\boxed{0} + \boxed{10}$$

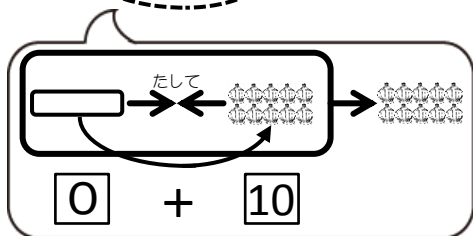
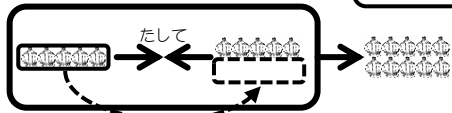
④  $\boxed{4} + \boxed{6} = \boxed{\phantom{00}}$



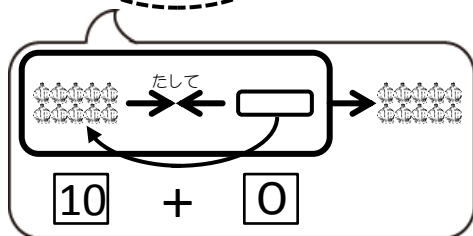
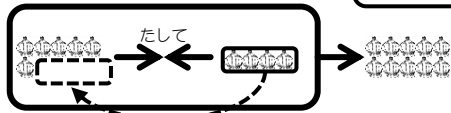
$$\boxed{0} + \boxed{10}$$

問題 たし算をしましょう。

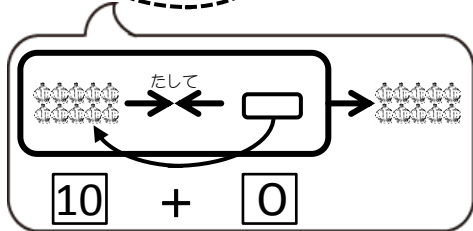
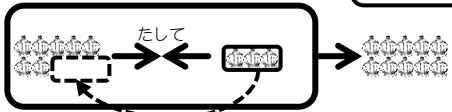
⑤  $5 + 5 = \square$



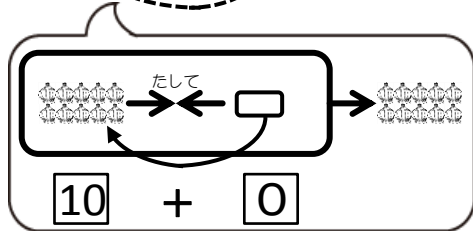
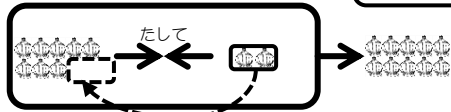
⑥  $6 + 4 = \square$



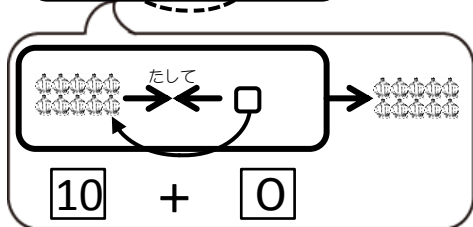
⑦  $7 + 3 = \square$



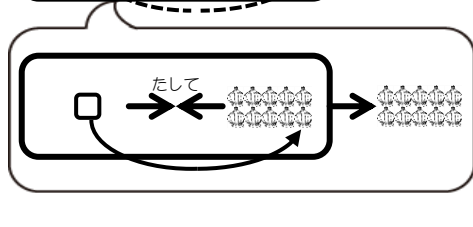
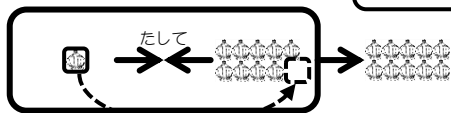
⑧  $8 + 2 = \square$



⑨  $9 + 1 = \square$

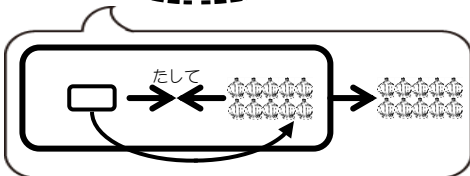
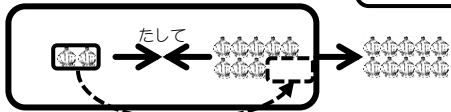


⑩  $1 + 9 = \square$

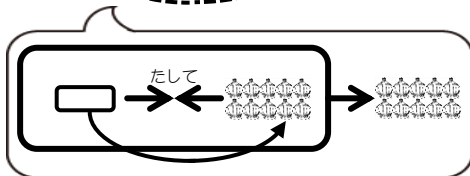
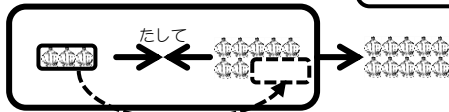


**問題** たし算をしましょう。

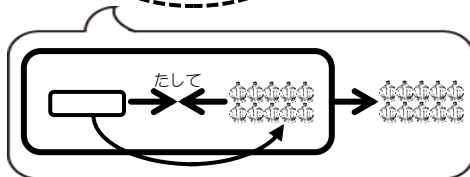
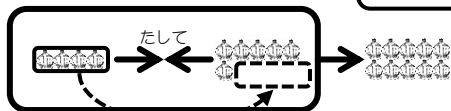
⑪  $2 + 8 = \square$



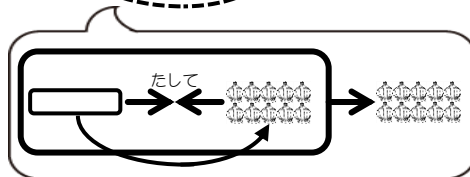
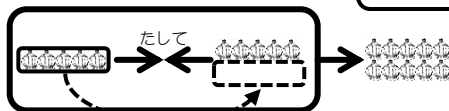
⑫  $3 + 7 = \square$



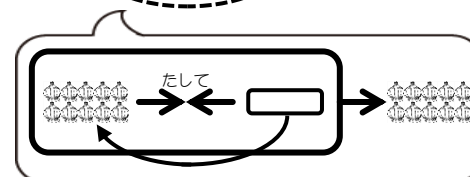
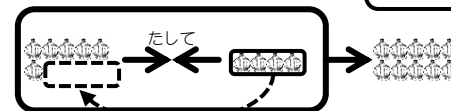
⑬  $4 + 6 = \square$



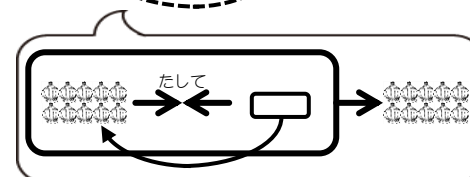
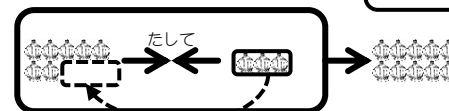
⑭  $5 + 5 = \square$



⑮  $6 + 4 = \square$

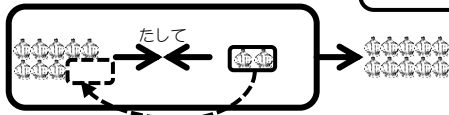


⑯  $7 + 3 = \square$

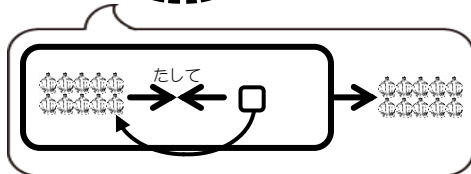
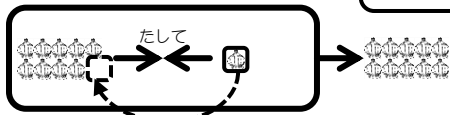


問題 たし算をしましょう。

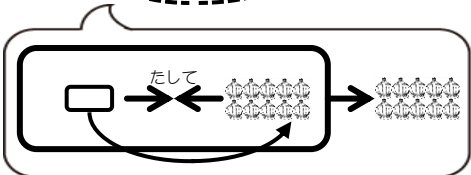
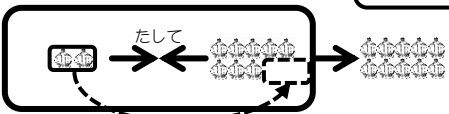
⑰  $8 + 2 = \square$



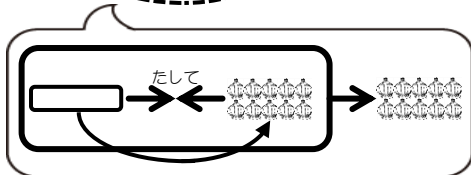
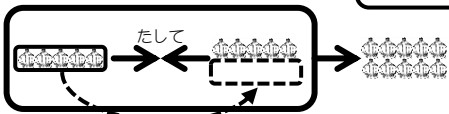
⑱  $9 + 1 = \square$



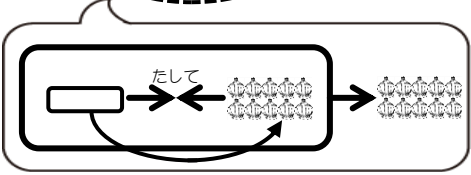
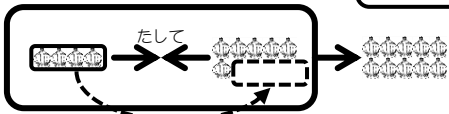
⑲  $2 + 8 = \square$



⑳  $5 + 5 = \square$



㉑  $4 + 6 = \square$



㉒  $7 + 3 = \square$

