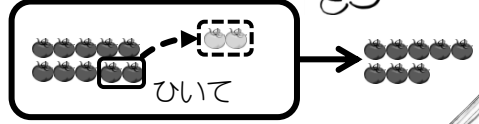
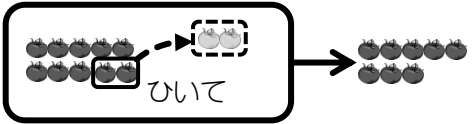


例題 ひき算をしましょう。



$$10 - 2 = \square$$

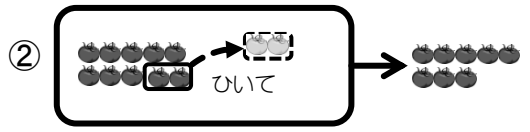


$$10 - 2 = 8$$

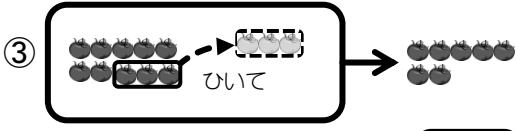
問題 ひき算をしましょう。



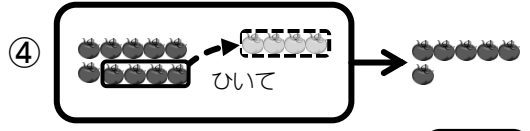
$$10 - 1 = \square$$



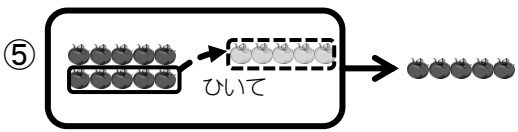
$$10 - 2 = \square$$



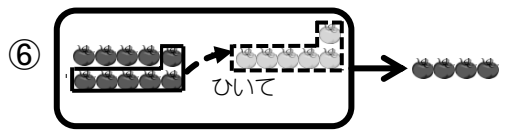
$$10 - 3 = \square$$



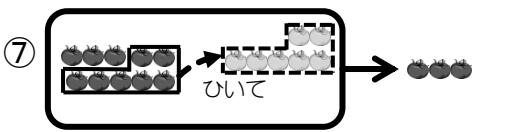
$$10 - 4 = \square$$



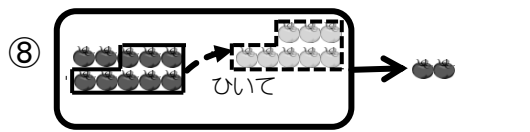
$$10 - 5 = \square$$



$$10 - 6 = \square$$

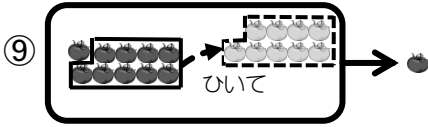


$$10 - 7 = \square$$

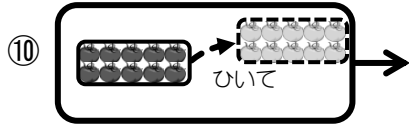


$$10 - 8 = \square$$

問題 ひき算をしましょう。



$$10 - 9 = \square$$



$$10 - 10 = \square$$

⑪  $10 - 1 = \square$

⑫  $10 - 2 = \square$

⑬  $10 - 3 = \square$

⑭  $10 - 4 = \square$

⑮  $10 - 5 = \square$

⑯  $10 - 6 = \square$

⑰  $10 - 7 = \square$

⑱  $10 - 8 = \square$

⑲  $10 - 9 = \square$

⑳  $10 - 10 = \square$

