
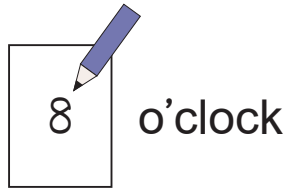



7 - 1

How Many?

Hour

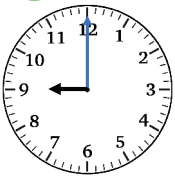
Example Read the time.



- The analogue clock has 2 hands, one long (**minute hand**) and one short (**hour hand**), that go around.
- The long hand is on 12 and the short hand is on 8.
- When the long hand is on 12, it says **o'clock**.


1 Read the time.

1




o'clock

2




o'clock

3




o'clock

4



o'clock

5



o'clock


6




o'clock

2 Read the time.

1



2



Don't forget to write the units.





7 - 2

What Time is It?

Half-Hour

Instruction



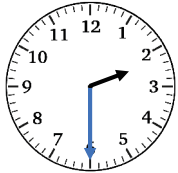
Short hand	Points at 8	Points between 8 and 9	Points at 9
Long hand	Points at 12	Points at 6	Points at 12
Reading	It's eight o'clock	It's half past eight o'clock	It's nine o'clock



- The long hand goes from 12 to 6, and the short hand goes from 8 to 9.
- When the long hand is on 6, it is half past o'clock.

Example 1

Read the time.



Half past o'clock


1 Read the time.

1




Half past o'clock

2




Half past o'clock

3



Half past o'clock

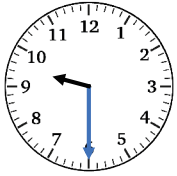
4



Half past o'clock

2 Read the time.

1



2




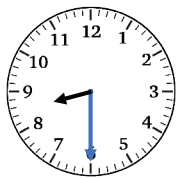
3



4





Example 2 On right or left, which clock shows half past 8 o'clock?





Left

3 On right or left, which clock shows half past 7 o'clock?



4 On right or left, which clock shows half past 1 o'clock?



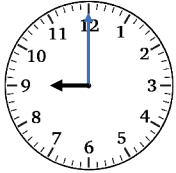
7 - 3

What Time is It?

Review


1 Read the time.

1



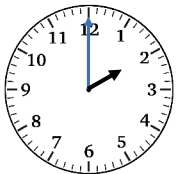
o'clock

2




o'clock

3



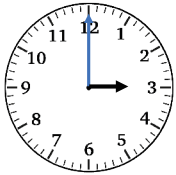
o'clock

4




o'clock

5



o'clock


6




o'clock

2 Read the time.


1




2




3




4



5




6



3 Read the time.

1



Half past o'clock

2



Half past o'clock

3



Half past o'clock

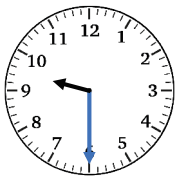
4



Half past o'clock

4 Read the time.


1




2





3



4



5 On right or left, which clock shows half past 10 o'clock?



6 On right or left, which clock shows half past 1 o'clock?

