

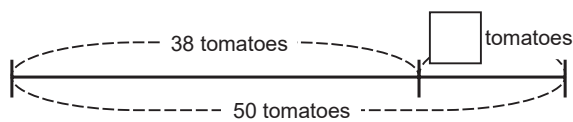
16-1

Expressing Math Sentence Using a □

Addition and Subtraction (1)

Example Express the following story with an addition math sentence. You can use a □ as the unknown number. Then find the answer.

There were 38 tomatoes in my house. Because my mother bought some new tomatoes today, there are now 50 tomatoes. How many tomatoes did my mother buy?



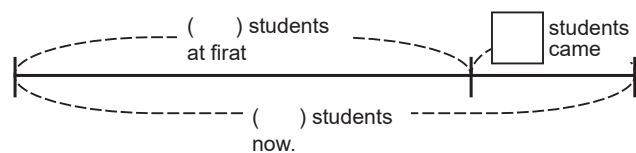
Math Sentence $38 + \square = 50$

How to find a number in the □ $50 - 38 = 12$ Answer 12 tomatoes

Express the following stories with addition math sentences. You can use a □ as the unknown number. Then find the answers.

1 There were 34 students in my classroom. Because some students came from the next classroom, there are now 47 students in my classroom. How many students came from the next classroom?

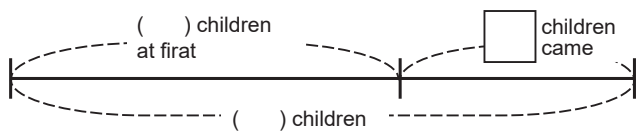
Math Sentence



How to find a number in the □ Answer students

2 There were 37 children playing in the park. Then some additional children came. Now there are 52 children in the park. How many children came to the park?

Math Sentence



How to find a number in the □ Answer children

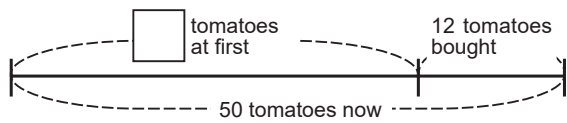
16-2

Expressing Math Sentence Using a □

Addition and Subtraction (2)

Example Express the following story with an addition math sentence. You can use a □ as the unknown number. Then find the answer.

There were some tomatoes in my house. Because my mother bought 12 new tomatoes today, there are 50 tomatoes now. How many tomatoes were there at first?



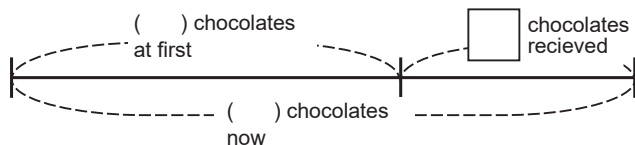
Math Sentence $\square + 12 = 50$

How to find a number in the \square $50 - 12 = 38$ Answer 38 tomatoes

Express the following stories with subtraction math sentences. You can use a □ as the unknown number. Then find the answers.

1 I had 15 chocolates. My friends gave me some more chocolates. Now I have 24 chocolates. How many chocolates did my friends give me?

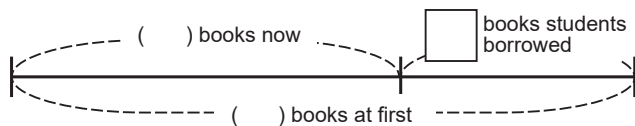
Math Sentence \square



How to find a number in the \square \square Answer \square chocolates

2 There were 72 books in my class library. Some students borrowed some books. There are now only 39 books left. How many books were borrowed by the students?

Math Sentence \square



How to find a number in the \square \square Answer \square books

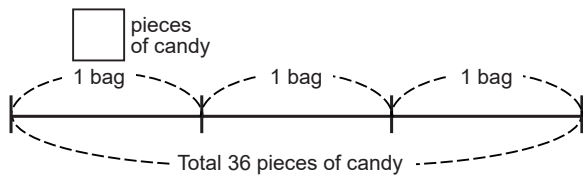
16-3

Expressing Math Sentence Using a □

Multiplication and Division (1)

Example Express the following story with an addition math sentence. You can use a □ as the unknown number. Then find the answer.

There are 3 bags containing the same number of candy each. The total number of candy is 36 pieces. How many pieces of candy are there in each bag?



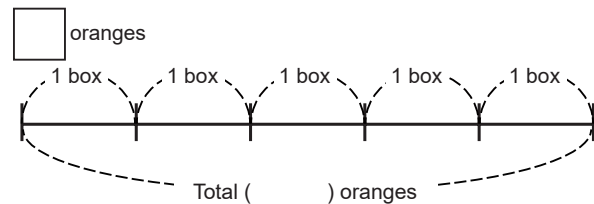
Math Sentence $\square \times 3 = 36$

How to find a number in the \square $36 \div 3 = 12$ Answer 12 pieces of candy

Express the following stories with multiplication math sentences. You can use a □ as the unknown number. Then find the answers.

- 1 There are 5 boxes containing the same number of oranges. The total number of oranges is 50. How many oranges are there in each box?

Math Sentence

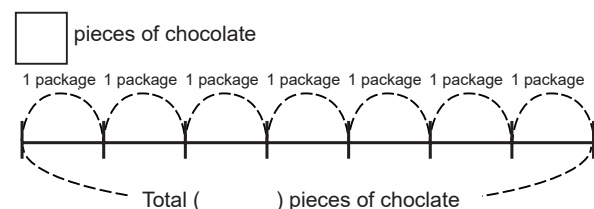


How to find a number in the \square

Answer oranges

- 2 My father bought 7 packages of chocolates. There are 63 pieces of chocolate altogether. How many pieces of chocolate does each package has?

Math Sentence



How to find a number in the \square

Answer pieces of chocolate

16-4


Expressing Math Sentence Using a □

Multiplication and Division (2)

Example Express the following story with an addition math sentence. You can use a □ as the unknown number. Then find the answer.

36 pieces of candy are divided up equally. Each person gets 3 pieces. How many people are there altogether?

3 pieces of candy □ people



Math Sentence

$$36 \div \square = 3$$

How to find a number in the □

$$36 \div 3 = 12$$

Answer

12

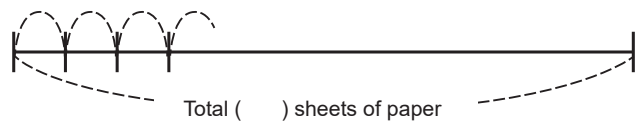
people

Express the following stories with division math sentences. You can use a □ as the unknown number. Then find the answers.

- 1 There are 56 sheets of paper. These are divided equally, and each student ends up with 8 sheets each. How many students are there?

Math Sentence

() sheets □ students



How to find a number in the □

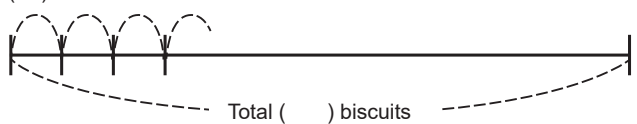
Answer

students

- 2 36 biscuits are divided equally among some children and each child gets 4 biscuits. How many children are there?

Math Sentence

() biscuits □ children



How to find a number in the □

Answer

children

16-5

Expressing Math Sentence Using a \square

Review

Express the following stories with division math sentences. You can use a \square as the unknown number. Then find the answers.

- 1 There were 25 students reading books in the library. More students came and now there are 37 students in the library. How many students came to the library?

Math Sentence

How to find a number in the

Answer

students

- 2 There were 64 people participating in the sports festival. Then some people went back home. Now there are only 28 people. How many people went back home?

Math Sentence

How to find a number in the

Answer

people

- 3 My mother bought 7 boxes containing some pieces of chocolate. Now there are 56 pieces of chocolate altogether. How many pieces of chocolate are there in each box?

Math Sentence

How to find a number in the

Answer

pieces of chocolate

- 4 44 biscuits are divided equally among some children and each child gets 4 biscuits each. How many children are there?

Math Sentence

How to find a number in the

Answer

children